

Addition on Number Lines

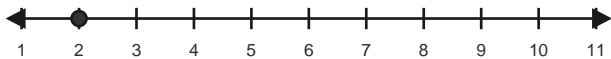
Name: _____

Date: _____

Use forward hops on the number line to solve each equation. - Within 10

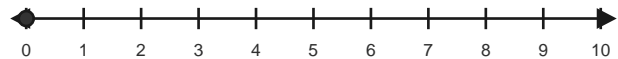
1) $2 + 1 = \underline{\quad}$

Start at 2 and hop forward 1 times.



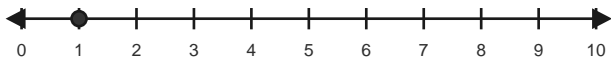
2) $0 + 4 = \underline{\quad}$

Start at 0 and hop forward 4 times.



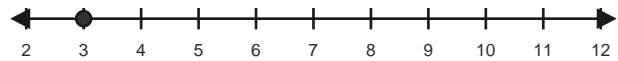
3) $1 + 3 = \underline{\quad}$

Start at 1 and hop forward 3 times.



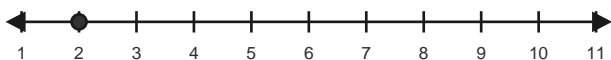
4) $3 + 2 = \underline{\quad}$

Start at 3 and hop forward 2 times.



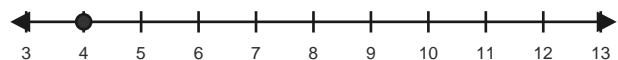
5) $2 + 4 = \underline{\quad}$

Start at 2 and hop forward 4 times.



6) $4 + 3 = \underline{\quad}$

Start at 4 and hop forward 3 times.



Answer Key

The red hops show one correct way to solve each addition equation. - Within 10

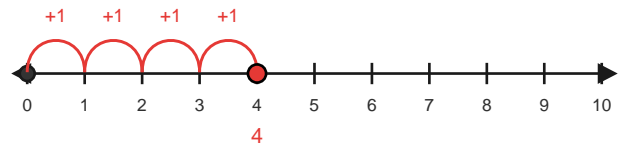
1) $2 + 1 = 3$

Start at 2 and hop forward 1 times.



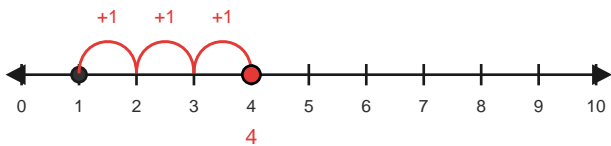
2) $0 + 4 = 4$

Start at 0 and hop forward 4 times.



3) $1 + 3 = 4$

Start at 1 and hop forward 3 times.



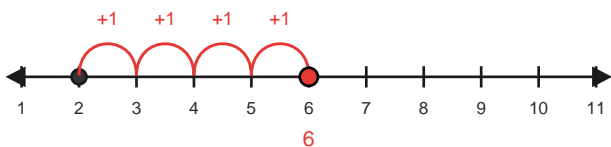
4) $3 + 2 = 5$

Start at 3 and hop forward 2 times.



5) $2 + 4 = 6$

Start at 2 and hop forward 4 times.



6) $4 + 3 = 7$

Start at 4 and hop forward 3 times.

