

# Addition on Number Lines

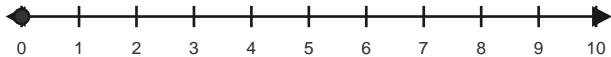
Name: \_\_\_\_\_

Date: \_\_\_\_\_

Use forward hops on the number line to solve each equation. - Within 10

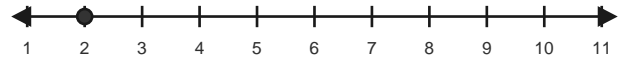
1)  $0 + 3 = \underline{\quad}$

Start at 0 and hop forward 3 times.



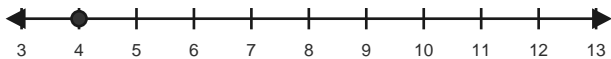
2)  $2 + 4 = \underline{\quad}$

Start at 2 and hop forward 4 times.



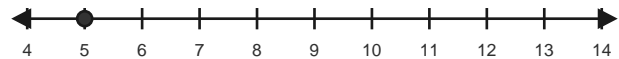
3)  $4 + 3 = \underline{\quad}$

Start at 4 and hop forward 3 times.



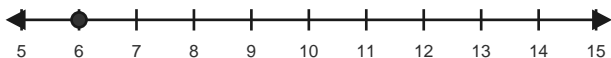
4)  $5 + 3 = \underline{\quad}$

Start at 5 and hop forward 3 times.



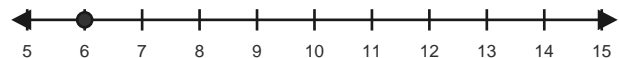
5)  $6 + 2 = \underline{\quad}$

Start at 6 and hop forward 2 times.



6)  $6 + 4 = \underline{\quad}$

Start at 6 and hop forward 4 times.

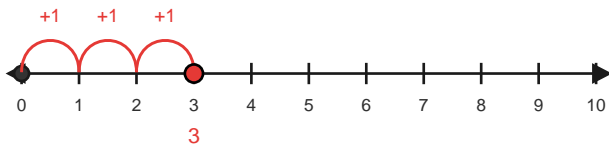


# Answer Key

The red hops show one correct way to solve each addition equation. - Within 10

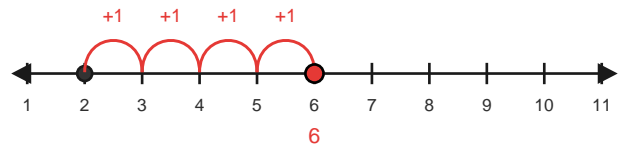
1)  $0 + 3 = 3$

Start at 0 and hop forward 3 times.



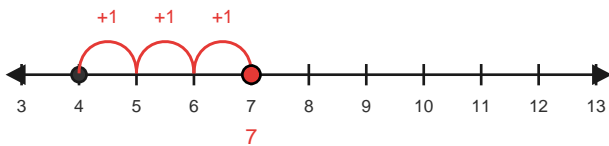
2)  $2 + 4 = 6$

Start at 2 and hop forward 4 times.



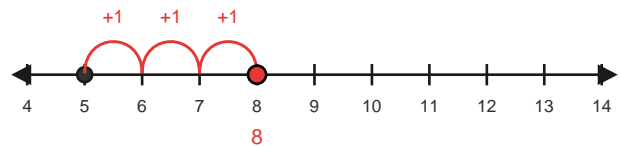
3)  $4 + 3 = 7$

Start at 4 and hop forward 3 times.



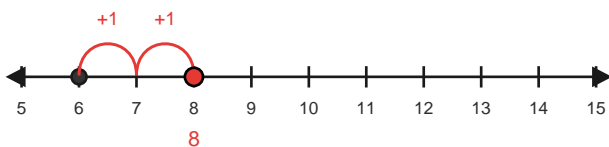
4)  $5 + 3 = 8$

Start at 5 and hop forward 3 times.



5)  $6 + 2 = 8$

Start at 6 and hop forward 2 times.



6)  $6 + 4 = 10$

Start at 6 and hop forward 4 times.

