

# Addition on Number Lines

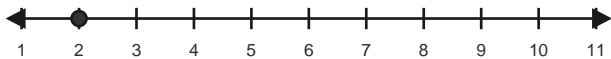
Name: \_\_\_\_\_

Date: \_\_\_\_\_

Use forward hops on the number line to solve each equation. - Within 20

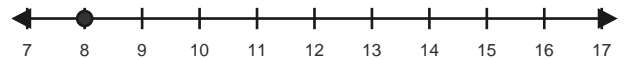
1)  $2 + 6 = \underline{\quad}$

Start at 2 and hop forward 6 times.



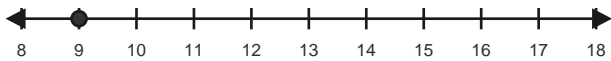
2)  $8 + 3 = \underline{\quad}$

Start at 8 and hop forward 3 times.



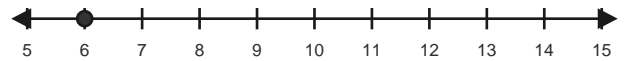
3)  $9 + 2 = \underline{\quad}$

Start at 9 and hop forward 2 times.



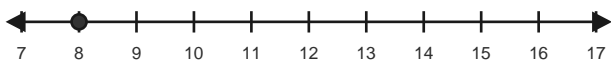
4)  $6 + 6 = \underline{\quad}$

Start at 6 and hop forward 6 times.



5)  $8 + 5 = \underline{\quad}$

Start at 8 and hop forward 5 times.



6)  $10 + 6 = \underline{\quad}$

Start at 10 and hop forward 6 times.

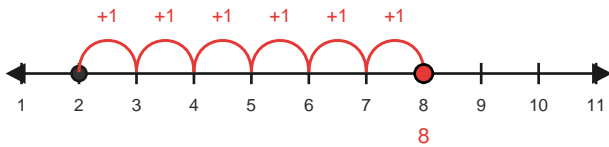


# Answer Key

The red hops show one correct way to solve each addition equation. - Within 20

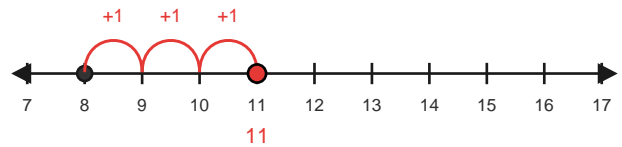
1)  $2 + 6 = 8$

Start at 2 and hop forward 6 times.



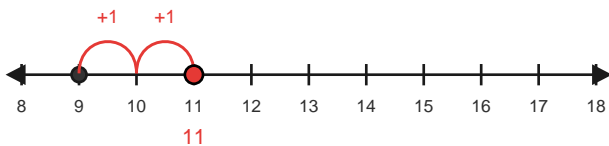
2)  $8 + 3 = 11$

Start at 8 and hop forward 3 times.



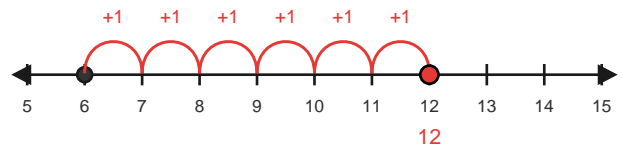
3)  $9 + 2 = 11$

Start at 9 and hop forward 2 times.



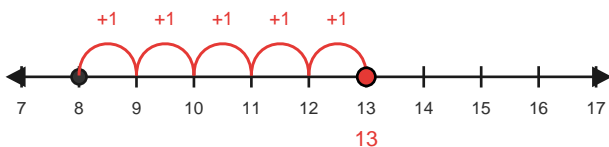
4)  $6 + 6 = 12$

Start at 6 and hop forward 6 times.



5)  $8 + 5 = 13$

Start at 8 and hop forward 5 times.



6)  $10 + 6 = 16$

Start at 10 and hop forward 6 times.

