

Addition on Number Lines

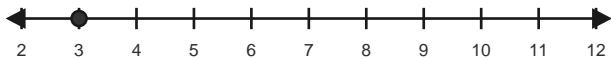
Name: _____

Date: _____

Use forward hops on the number line to solve each equation. - Within 20

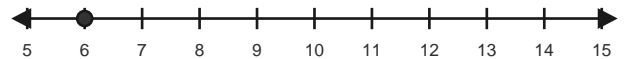
1) $3 + 3 = \underline{\quad}$

Start at 3 and hop forward 3 times.



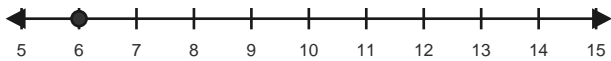
2) $6 + 3 = \underline{\quad}$

Start at 6 and hop forward 3 times.



3) $6 + 5 = \underline{\quad}$

Start at 6 and hop forward 5 times.



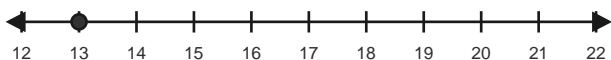
4) $9 + 5 = \underline{\quad}$

Start at 9 and hop forward 5 times.



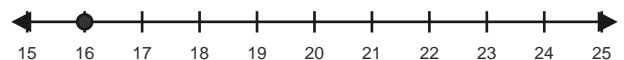
5) $13 + 5 = \underline{\quad}$

Start at 13 and hop forward 5 times.



6) $16 + 4 = \underline{\quad}$

Start at 16 and hop forward 4 times.

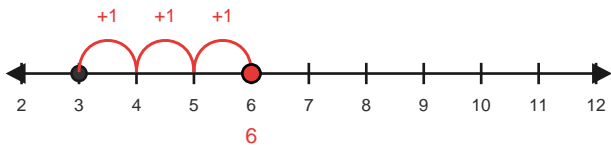


Answer Key

The red hops show one correct way to solve each addition equation. - Within 20

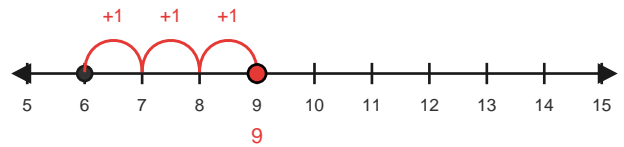
1) $3 + 3 = 6$

Start at 3 and hop forward 3 times.



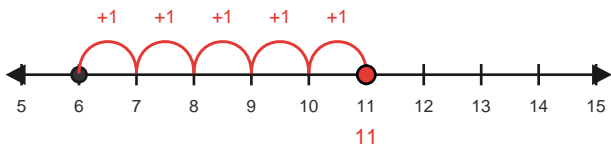
2) $6 + 3 = 9$

Start at 6 and hop forward 3 times.



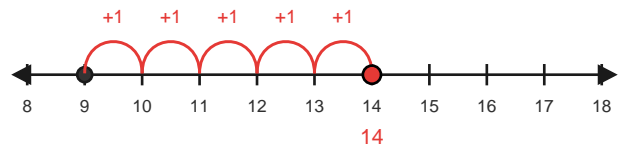
3) $6 + 5 = 11$

Start at 6 and hop forward 5 times.



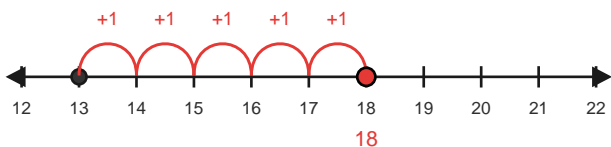
4) $9 + 5 = 14$

Start at 9 and hop forward 5 times.



5) $13 + 5 = 18$

Start at 13 and hop forward 5 times.



6) $16 + 4 = 20$

Start at 16 and hop forward 4 times.

