

Addition on Number Lines

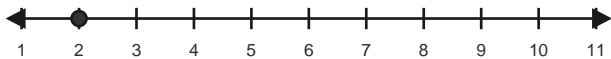
Name: _____

Date: _____

Use forward hops on the number line to solve each equation. - Within 20

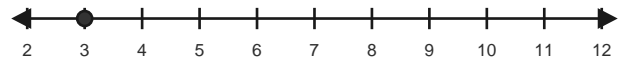
1) $2 + 5 = \underline{\quad}$

Start at 2 and hop forward 5 times.



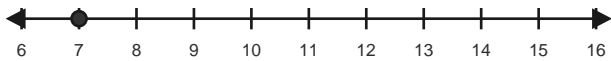
2) $3 + 6 = \underline{\quad}$

Start at 3 and hop forward 6 times.



3) $7 + 2 = \underline{\quad}$

Start at 7 and hop forward 2 times.



4) $7 + 4 = \underline{\quad}$

Start at 7 and hop forward 4 times.



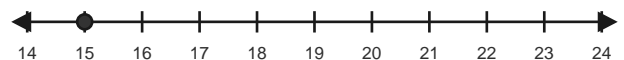
5) $9 + 5 = \underline{\quad}$

Start at 9 and hop forward 5 times.



6) $15 + 5 = \underline{\quad}$

Start at 15 and hop forward 5 times.

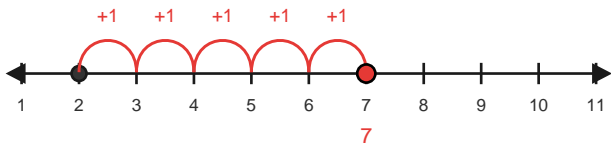


Answer Key

The red hops show one correct way to solve each addition equation. - Within 20

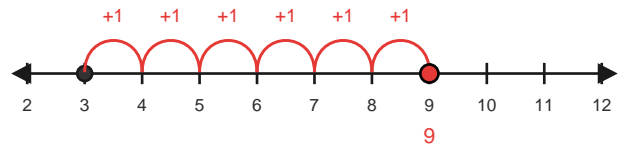
1) $2 + 5 = 7$

Start at 2 and hop forward 5 times.



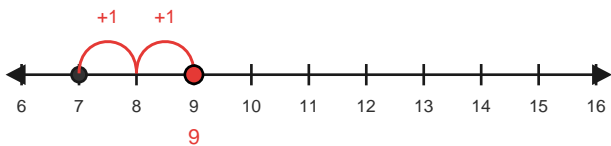
2) $3 + 6 = 9$

Start at 3 and hop forward 6 times.



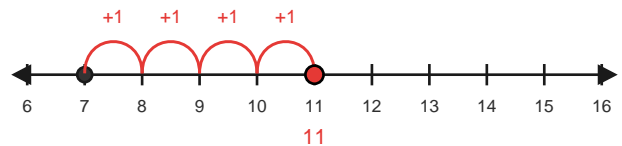
3) $7 + 2 = 9$

Start at 7 and hop forward 2 times.



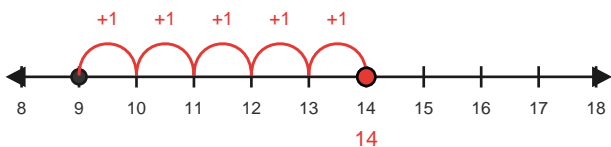
4) $7 + 4 = 11$

Start at 7 and hop forward 4 times.



5) $9 + 5 = 14$

Start at 9 and hop forward 5 times.



6) $15 + 5 = 20$

Start at 15 and hop forward 5 times.

