

# Addition on Number Lines

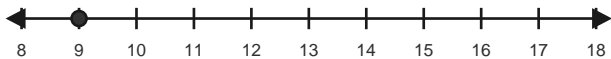
Name: \_\_\_\_\_

Date: \_\_\_\_\_

Use forward hops on the number line to solve each equation. - Within 40

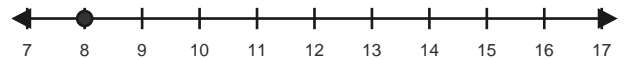
1)  $9 + 3 = \underline{\quad}$

Start at 9 and hop forward 3 times.



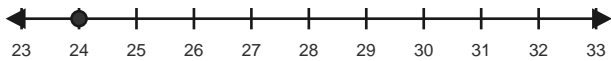
2)  $8 + 7 = \underline{\quad}$

Start at 8 and hop forward 7 times.



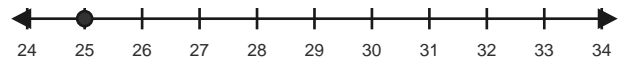
3)  $24 + 4 = \underline{\quad}$

Start at 24 and hop forward 4 times.



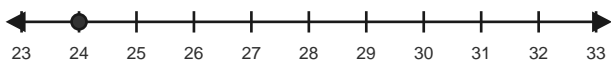
4)  $25 + 3 = \underline{\quad}$

Start at 25 and hop forward 3 times.



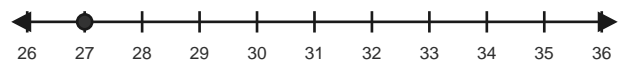
5)  $24 + 7 = \underline{\quad}$

Start at 24 and hop forward 7 times.



6)  $27 + 7 = \underline{\quad}$

Start at 27 and hop forward 7 times.

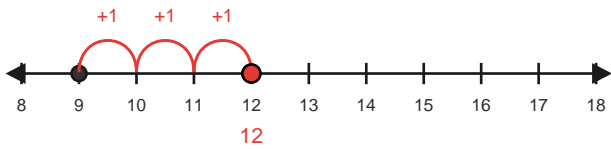


# Answer Key

The red hops show one correct way to solve each addition equation. - Within 40

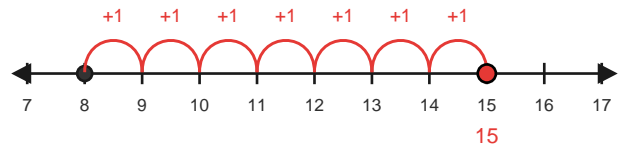
1)  $9 + 3 = 12$

Start at 9 and hop forward 3 times.



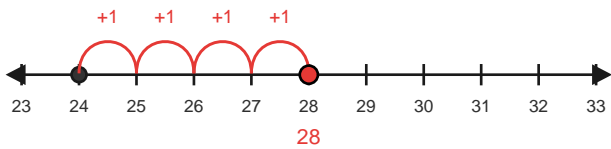
2)  $8 + 7 = 15$

Start at 8 and hop forward 7 times.



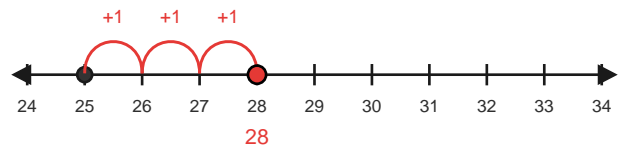
3)  $24 + 4 = 28$

Start at 24 and hop forward 4 times.



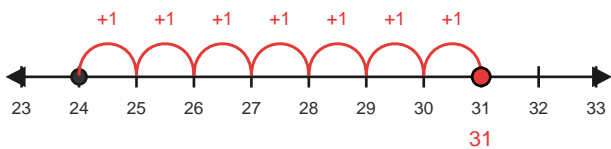
4)  $25 + 3 = 28$

Start at 25 and hop forward 3 times.



5)  $24 + 7 = 31$

Start at 24 and hop forward 7 times.



6)  $27 + 7 = 34$

Start at 27 and hop forward 7 times.

