

# Addition on Number Lines

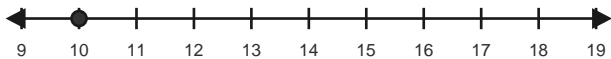
Name: \_\_\_\_\_

Date: \_\_\_\_\_

Use forward hops on the number line to solve each equation. - Within 40

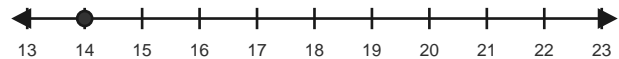
1)  $10 + 7 = \underline{\quad}$

Start at 10 and hop forward 7 times.



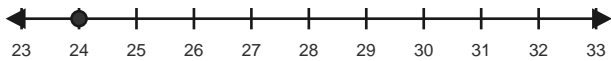
2)  $14 + 5 = \underline{\quad}$

Start at 14 and hop forward 5 times.



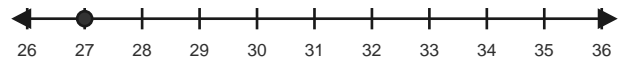
3)  $24 + 4 = \underline{\quad}$

Start at 24 and hop forward 4 times.



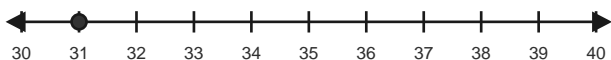
4)  $27 + 6 = \underline{\quad}$

Start at 27 and hop forward 6 times.



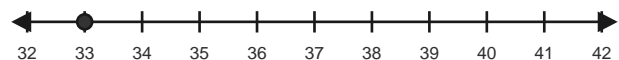
5)  $31 + 7 = \underline{\quad}$

Start at 31 and hop forward 7 times.



6)  $33 + 6 = \underline{\quad}$

Start at 33 and hop forward 6 times.

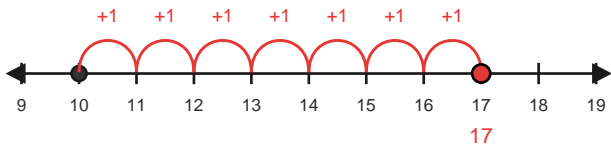


# Answer Key

The red hops show one correct way to solve each addition equation. - Within 40

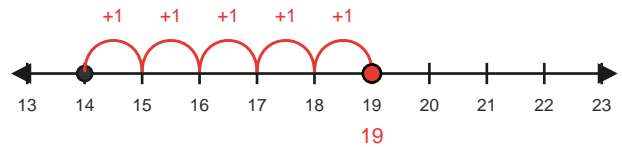
1)  $10 + 7 = 17$

Start at 10 and hop forward 7 times.



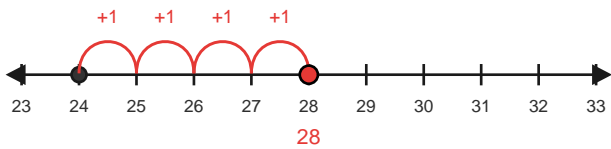
2)  $14 + 5 = 19$

Start at 14 and hop forward 5 times.



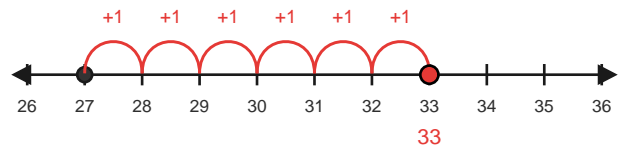
3)  $24 + 4 = 28$

Start at 24 and hop forward 4 times.



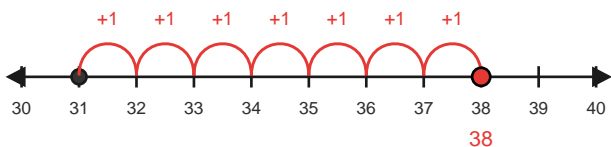
4)  $27 + 6 = 33$

Start at 27 and hop forward 6 times.



5)  $31 + 7 = 38$

Start at 31 and hop forward 7 times.



6)  $33 + 6 = 39$

Start at 33 and hop forward 6 times.

