

Addition on Number Lines

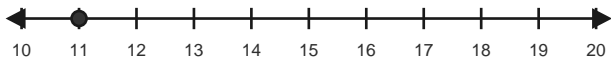
Name: _____

Date: _____

Use forward hops on the number line to solve each equation. - Within 40

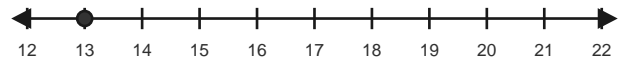
1) $11 + 5 = \underline{\quad}$

Start at 11 and hop forward 5 times.



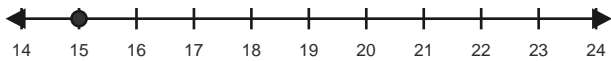
2) $13 + 5 = \underline{\quad}$

Start at 13 and hop forward 5 times.



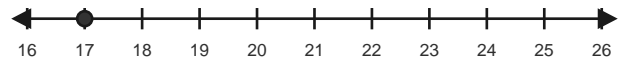
3) $15 + 4 = \underline{\quad}$

Start at 15 and hop forward 4 times.



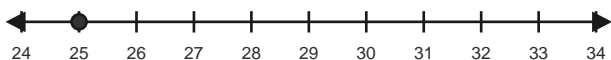
4) $17 + 7 = \underline{\quad}$

Start at 17 and hop forward 7 times.



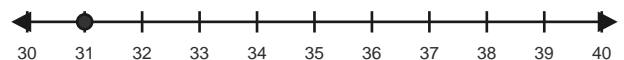
5) $25 + 3 = \underline{\quad}$

Start at 25 and hop forward 3 times.



6) $31 + 7 = \underline{\quad}$

Start at 31 and hop forward 7 times.

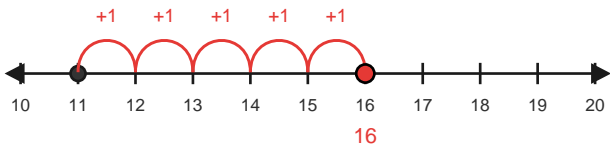


Answer Key

The red hops show one correct way to solve each addition equation. - Within 40

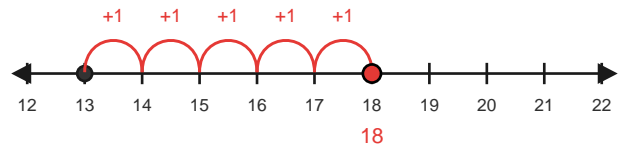
1) $11 + 5 = 16$

Start at 11 and hop forward 5 times.



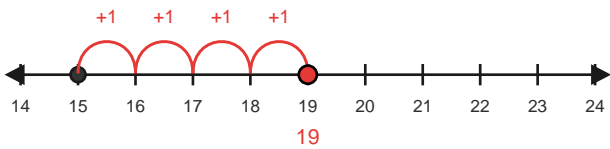
2) $13 + 5 = 18$

Start at 13 and hop forward 5 times.



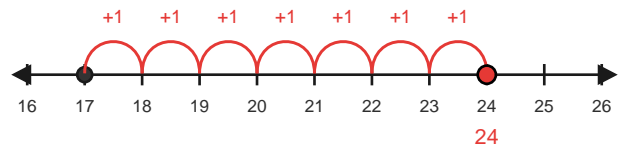
3) $15 + 4 = 19$

Start at 15 and hop forward 4 times.



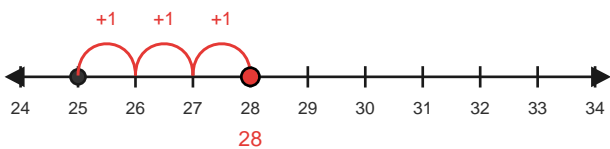
4) $17 + 7 = 24$

Start at 17 and hop forward 7 times.



5) $25 + 3 = 28$

Start at 25 and hop forward 3 times.



6) $31 + 7 = 38$

Start at 31 and hop forward 7 times.

