

# Addition on Number Lines

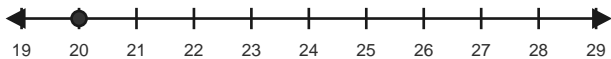
Name: \_\_\_\_\_

Date: \_\_\_\_\_

Use forward hops on the number line to solve each equation. - Within 40

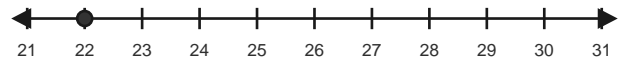
1)  $20 + 3 = \underline{\quad}$

Start at 20 and hop forward 3 times.



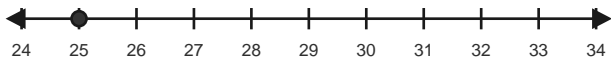
2)  $22 + 5 = \underline{\quad}$

Start at 22 and hop forward 5 times.



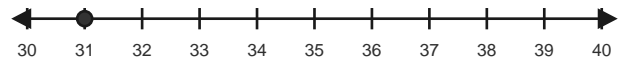
3)  $25 + 6 = \underline{\quad}$

Start at 25 and hop forward 6 times.



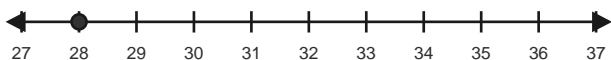
4)  $31 + 3 = \underline{\quad}$

Start at 31 and hop forward 3 times.



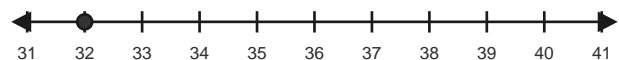
5)  $28 + 7 = \underline{\quad}$

Start at 28 and hop forward 7 times.



6)  $32 + 6 = \underline{\quad}$

Start at 32 and hop forward 6 times.

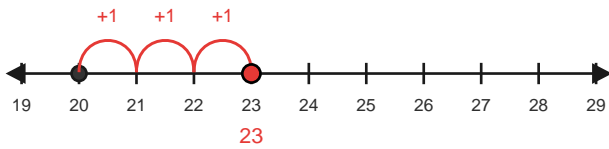


# Answer Key

The red hops show one correct way to solve each addition equation. - Within 40

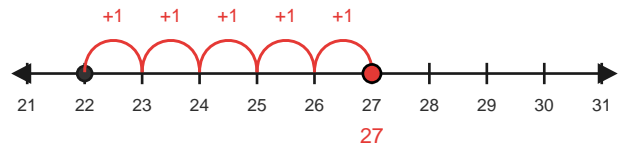
1)  $20 + 3 = 23$

Start at 20 and hop forward 3 times.



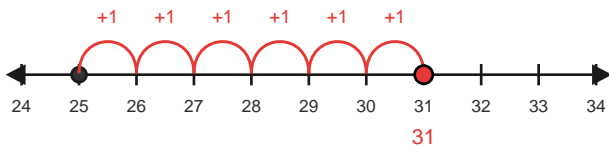
2)  $22 + 5 = 27$

Start at 22 and hop forward 5 times.



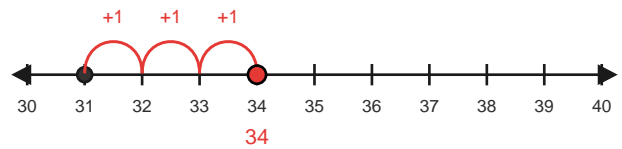
3)  $25 + 6 = 31$

Start at 25 and hop forward 6 times.



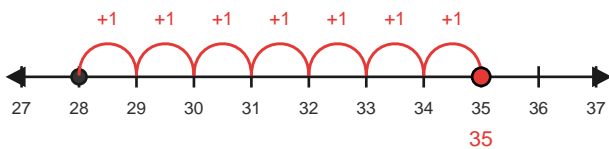
4)  $31 + 3 = 34$

Start at 31 and hop forward 3 times.



5)  $28 + 7 = 35$

Start at 28 and hop forward 7 times.



6)  $32 + 6 = 38$

Start at 32 and hop forward 6 times.

