

# Addition on Number Lines

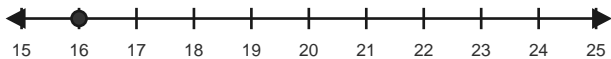
Name: \_\_\_\_\_

Date: \_\_\_\_\_

Use forward hops on the number line to solve each equation. - Within 60

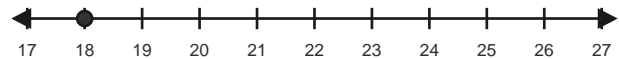
1)  $16 + 5 = \underline{\quad}$

Start at 16 and hop forward 5 times.



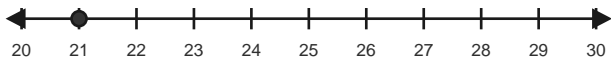
2)  $18 + 6 = \underline{\quad}$

Start at 18 and hop forward 6 times.



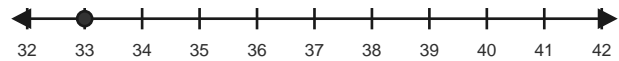
3)  $21 + 6 = \underline{\quad}$

Start at 21 and hop forward 6 times.



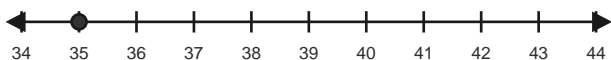
4)  $33 + 5 = \underline{\quad}$

Start at 33 and hop forward 5 times.



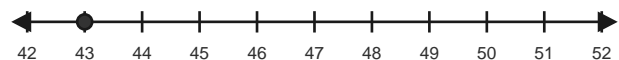
5)  $35 + 5 = \underline{\quad}$

Start at 35 and hop forward 5 times.



6)  $43 + 5 = \underline{\quad}$

Start at 43 and hop forward 5 times.

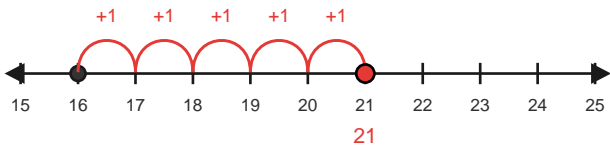


# Answer Key

The red hops show one correct way to solve each addition equation. - Within 60

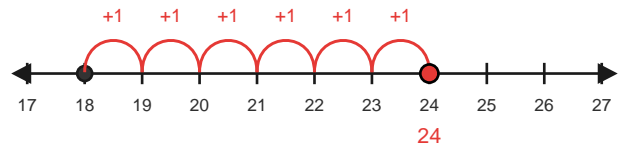
1)  $16 + 5 = 21$

Start at 16 and hop forward 5 times.



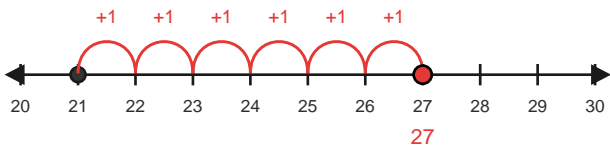
2)  $18 + 6 = 24$

Start at 18 and hop forward 6 times.



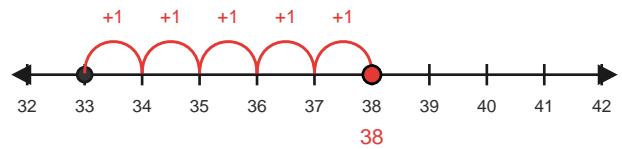
3)  $21 + 6 = 27$

Start at 21 and hop forward 6 times.



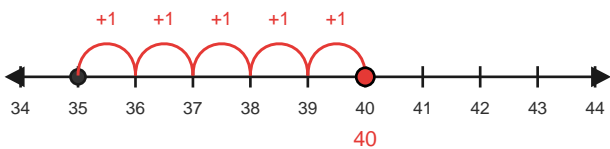
4)  $33 + 5 = 38$

Start at 33 and hop forward 5 times.



5)  $35 + 5 = 40$

Start at 35 and hop forward 5 times.



6)  $43 + 5 = 48$

Start at 43 and hop forward 5 times.

