

Addition on Number Lines

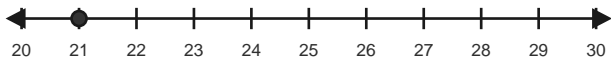
Name: _____

Date: _____

Use forward hops on the number line to solve each equation. - Within 60

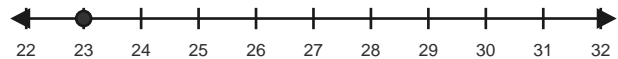
1) $21 + 5 = \underline{\quad}$

Start at 21 and hop forward 5 times.



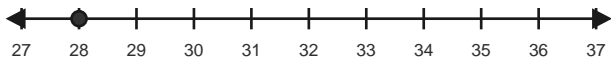
2) $23 + 7 = \underline{\quad}$

Start at 23 and hop forward 7 times.



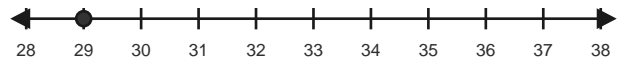
3) $28 + 8 = \underline{\quad}$

Start at 28 and hop forward 8 times.



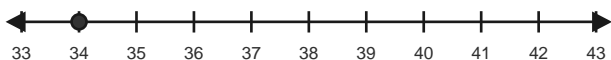
4) $29 + 7 = \underline{\quad}$

Start at 29 and hop forward 7 times.



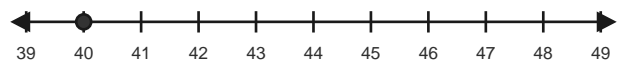
5) $34 + 5 = \underline{\quad}$

Start at 34 and hop forward 5 times.



6) $40 + 4 = \underline{\quad}$

Start at 40 and hop forward 4 times.

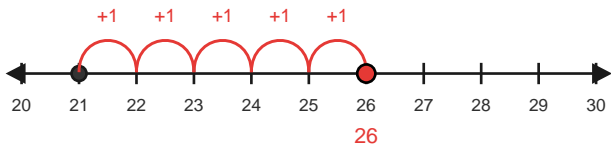


Answer Key

The red hops show one correct way to solve each addition equation. - Within 60

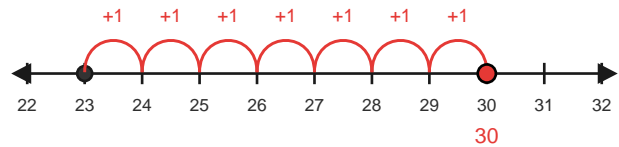
1) $21 + 5 = 26$

Start at 21 and hop forward 5 times.



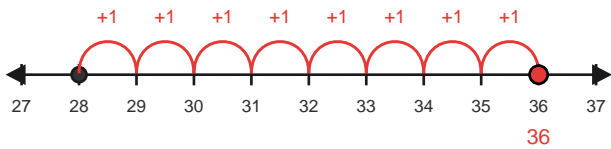
2) $23 + 7 = 30$

Start at 23 and hop forward 7 times.



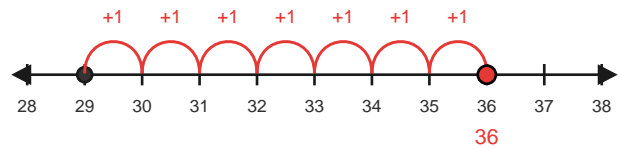
3) $28 + 8 = 36$

Start at 28 and hop forward 8 times.



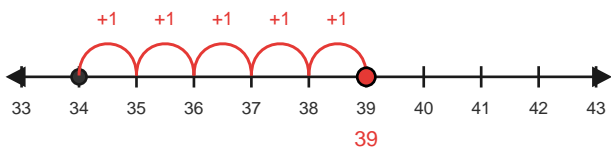
4) $29 + 7 = 36$

Start at 29 and hop forward 7 times.



5) $34 + 5 = 39$

Start at 34 and hop forward 5 times.



6) $40 + 4 = 44$

Start at 40 and hop forward 4 times.

