

Addition on Number Lines

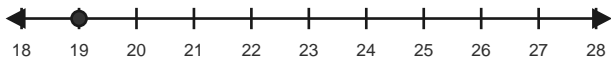
Name: _____

Date: _____

Use forward hops on the number line to solve each equation. - Within 60

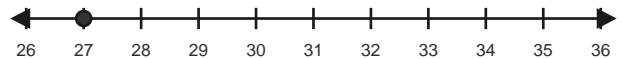
1) $19 + 7 = \underline{\quad}$

Start at 19 and hop forward 7 times.



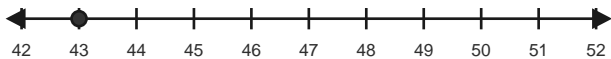
2) $27 + 7 = \underline{\quad}$

Start at 27 and hop forward 7 times.



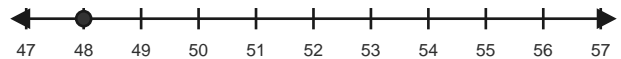
3) $43 + 4 = \underline{\quad}$

Start at 43 and hop forward 4 times.



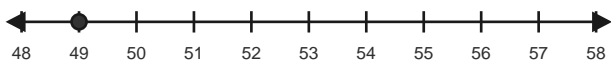
4) $48 + 5 = \underline{\quad}$

Start at 48 and hop forward 5 times.



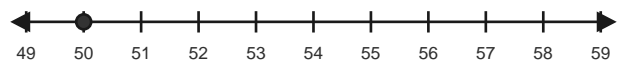
5) $49 + 4 = \underline{\quad}$

Start at 49 and hop forward 4 times.



6) $50 + 5 = \underline{\quad}$

Start at 50 and hop forward 5 times.

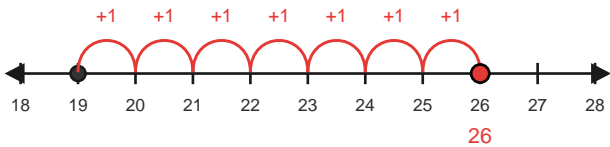


Answer Key

The red hops show one correct way to solve each addition equation. - Within 60

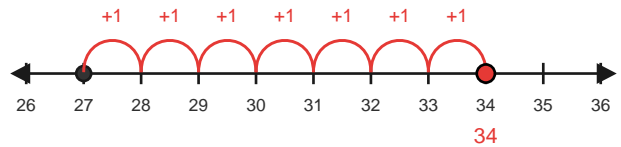
1) $19 + 7 = 26$

Start at 19 and hop forward 7 times.



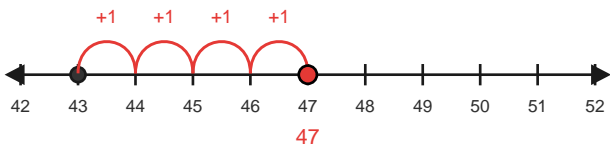
2) $27 + 7 = 34$

Start at 27 and hop forward 7 times.



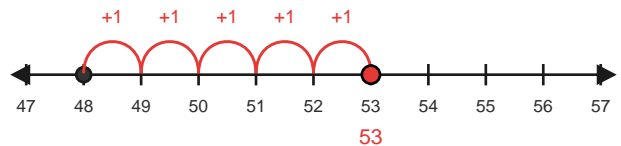
3) $43 + 4 = 47$

Start at 43 and hop forward 4 times.



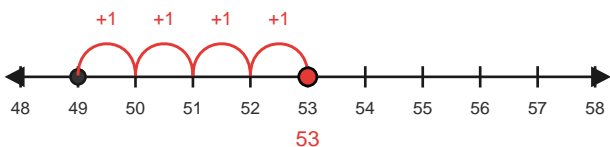
4) $48 + 5 = 53$

Start at 48 and hop forward 5 times.



5) $49 + 4 = 53$

Start at 49 and hop forward 4 times.



6) $50 + 5 = 55$

Start at 50 and hop forward 5 times.

