

Addition on Number Lines

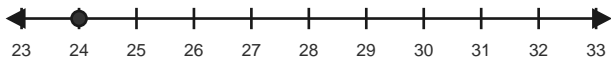
Name: _____

Date: _____

Use forward hops on the number line to solve each equation. - Within 60

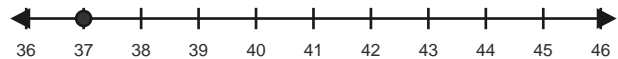
1) $24 + 7 = \underline{\quad}$

Start at 24 and hop forward 7 times.



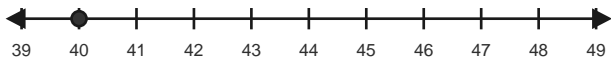
2) $37 + 6 = \underline{\quad}$

Start at 37 and hop forward 6 times.



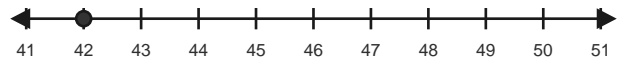
3) $40 + 6 = \underline{\quad}$

Start at 40 and hop forward 6 times.



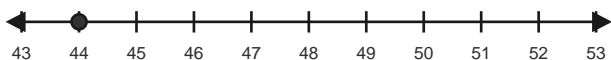
4) $42 + 7 = \underline{\quad}$

Start at 42 and hop forward 7 times.



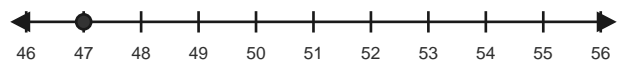
5) $44 + 6 = \underline{\quad}$

Start at 44 and hop forward 6 times.



6) $47 + 6 = \underline{\quad}$

Start at 47 and hop forward 6 times.

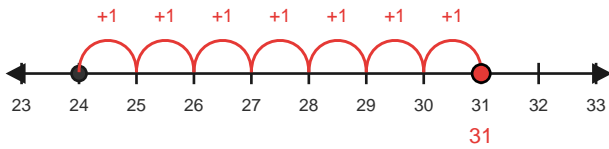


Answer Key

The red hops show one correct way to solve each addition equation. - Within 60

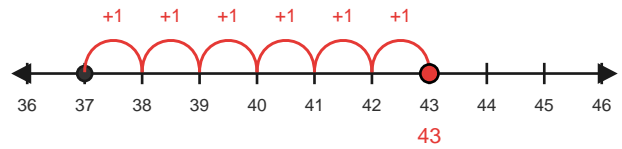
1) $24 + 7 = 31$

Start at 24 and hop forward 7 times.



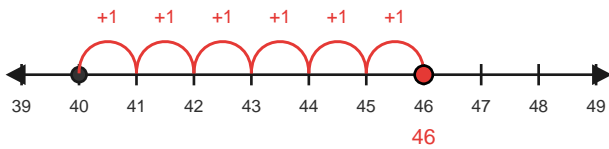
2) $37 + 6 = 43$

Start at 37 and hop forward 6 times.



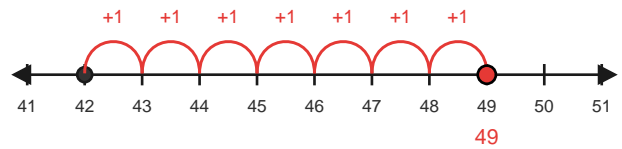
3) $40 + 6 = 46$

Start at 40 and hop forward 6 times.



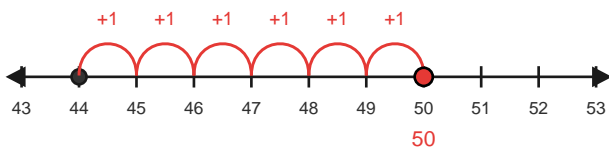
4) $42 + 7 = 49$

Start at 42 and hop forward 7 times.



5) $44 + 6 = 50$

Start at 44 and hop forward 6 times.



6) $47 + 6 = 53$

Start at 47 and hop forward 6 times.

