

Addition on Number Lines

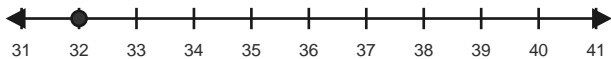
Name: _____

Date: _____

Use forward hops on the number line to solve each equation. - Within 100

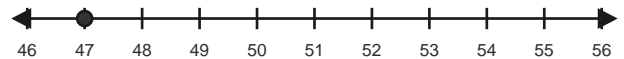
1) $32 + 5 = \underline{\quad}$

Start at 32 and hop forward 5 times.



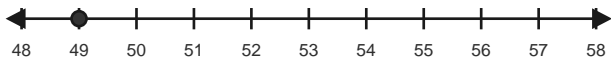
2) $47 + 9 = \underline{\quad}$

Start at 47 and hop forward 9 times.



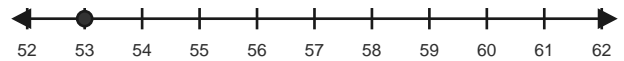
3) $49 + 7 = \underline{\quad}$

Start at 49 and hop forward 7 times.



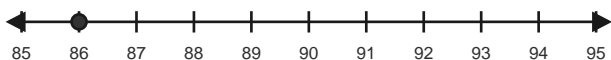
4) $53 + 6 = \underline{\quad}$

Start at 53 and hop forward 6 times.



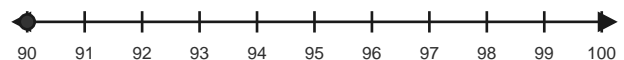
5) $86 + 7 = \underline{\quad}$

Start at 86 and hop forward 7 times.



6) $90 + 10 = \underline{\quad}$

Start at 90 and hop forward 10 times.

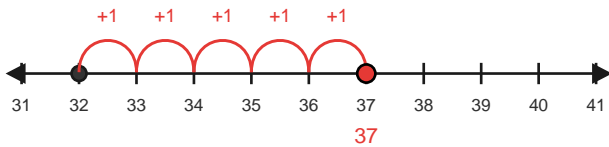


Answer Key

The red hops show one correct way to solve each addition equation. - Within 100

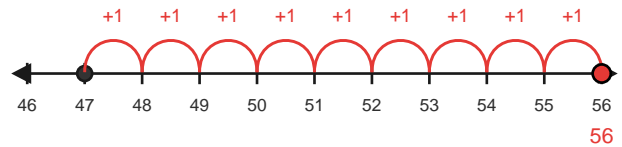
1) $32 + 5 = 37$

Start at 32 and hop forward 5 times.



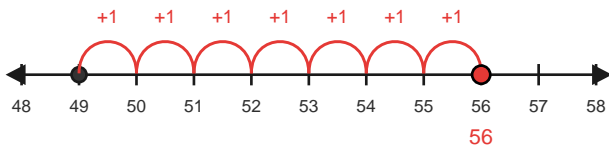
2) $47 + 9 = 56$

Start at 47 and hop forward 9 times.



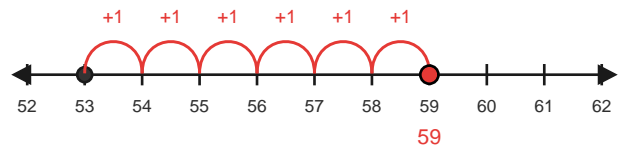
3) $49 + 7 = 56$

Start at 49 and hop forward 7 times.



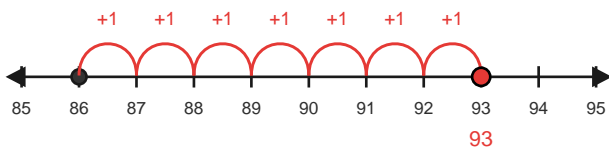
4) $53 + 6 = 59$

Start at 53 and hop forward 6 times.



5) $86 + 7 = 93$

Start at 86 and hop forward 7 times.



6) $90 + 10 = 100$

Start at 90 and hop forward 10 times.

