

Addition on Number Lines

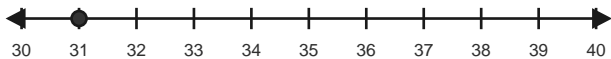
Name: _____

Date: _____

Use forward hops on the number line to solve each equation. - Within 100

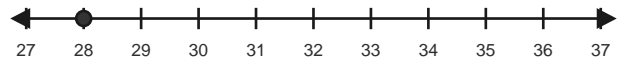
1) $31 + 5 = \underline{\quad}$

Start at 31 and hop forward 5 times.



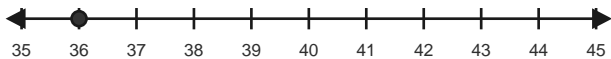
2) $28 + 9 = \underline{\quad}$

Start at 28 and hop forward 9 times.



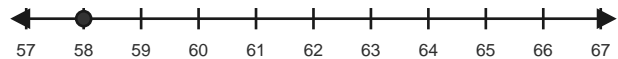
3) $36 + 7 = \underline{\quad}$

Start at 36 and hop forward 7 times.



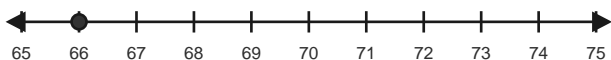
4) $58 + 6 = \underline{\quad}$

Start at 58 and hop forward 6 times.



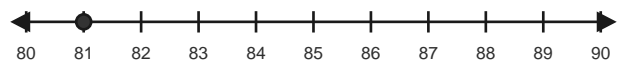
5) $66 + 9 = \underline{\quad}$

Start at 66 and hop forward 9 times.



6) $81 + 8 = \underline{\quad}$

Start at 81 and hop forward 8 times.

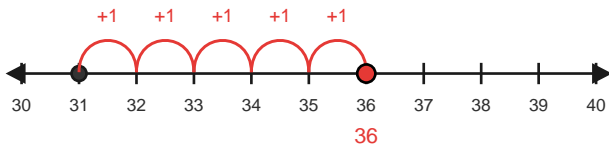


Answer Key

The red hops show one correct way to solve each addition equation. - Within 100

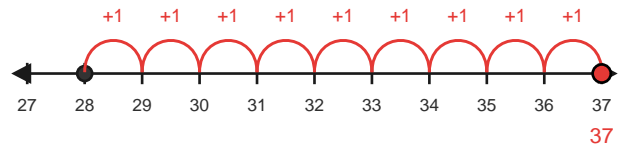
1) $31 + 5 = 36$

Start at 31 and hop forward 5 times.



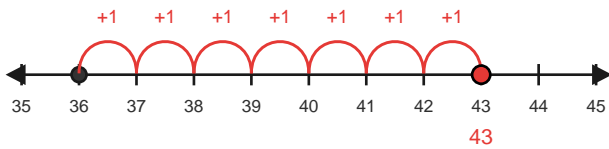
2) $28 + 9 = 37$

Start at 28 and hop forward 9 times.



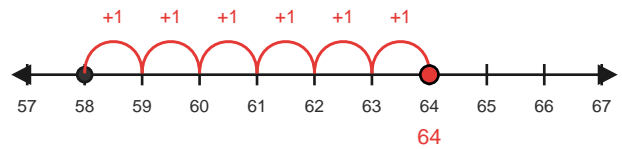
3) $36 + 7 = 43$

Start at 36 and hop forward 7 times.



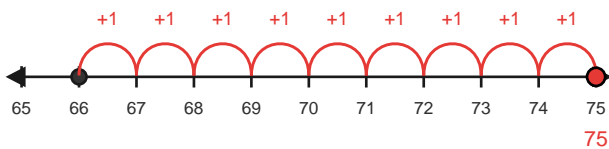
4) $58 + 6 = 64$

Start at 58 and hop forward 6 times.



5) $66 + 9 = 75$

Start at 66 and hop forward 9 times.



6) $81 + 8 = 89$

Start at 81 and hop forward 8 times.

