

# Addition on Number Lines

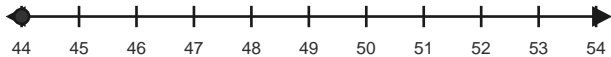
Name: \_\_\_\_\_

Date: \_\_\_\_\_

Use forward hops on the number line to solve each equation. - Within 100

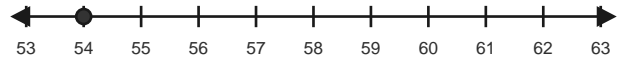
1)  $44 + 10 = \underline{\quad}$

Start at 44 and hop forward 10 times.



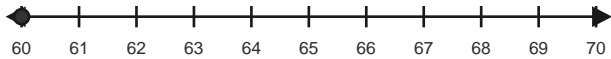
2)  $54 + 7 = \underline{\quad}$

Start at 54 and hop forward 7 times.



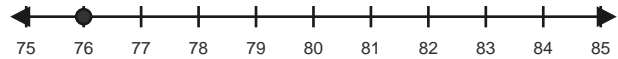
3)  $60 + 10 = \underline{\quad}$

Start at 60 and hop forward 10 times.



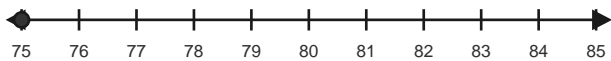
4)  $76 + 7 = \underline{\quad}$

Start at 76 and hop forward 7 times.



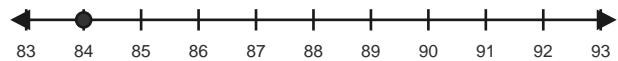
5)  $75 + 10 = \underline{\quad}$

Start at 75 and hop forward 10 times.



6)  $84 + 9 = \underline{\quad}$

Start at 84 and hop forward 9 times.

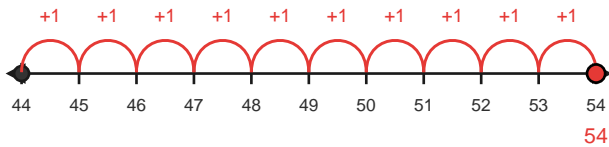


# Answer Key

The red hops show one correct way to solve each addition equation. - Within 100

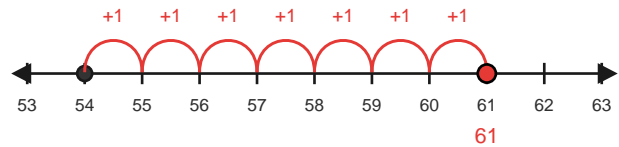
1)  $44 + 10 = 54$

Start at 44 and hop forward 10 times.



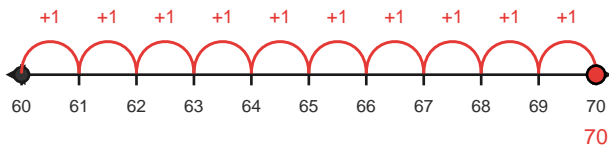
2)  $54 + 7 = 61$

Start at 54 and hop forward 7 times.



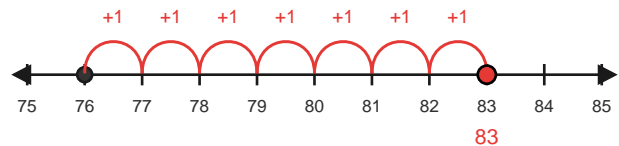
3)  $60 + 10 = 70$

Start at 60 and hop forward 10 times.



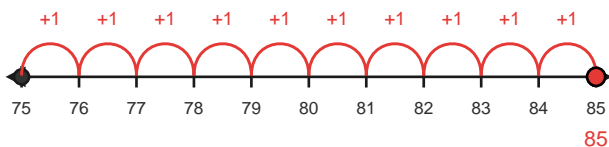
4)  $76 + 7 = 83$

Start at 76 and hop forward 7 times.



5)  $75 + 10 = 85$

Start at 75 and hop forward 10 times.



6)  $84 + 9 = 93$

Start at 84 and hop forward 9 times.

