

# Addition on Number Lines

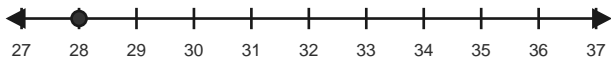
Name: \_\_\_\_\_

Date: \_\_\_\_\_

Use forward hops on the number line to solve each equation. - Within 100

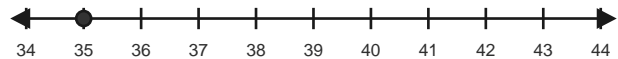
1)  $28 + 5 = \underline{\quad}$

Start at 28 and hop forward 5 times.



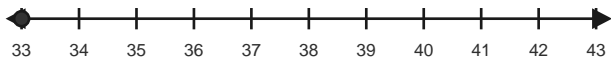
2)  $35 + 5 = \underline{\quad}$

Start at 35 and hop forward 5 times.



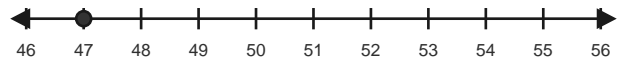
3)  $33 + 10 = \underline{\quad}$

Start at 33 and hop forward 10 times.



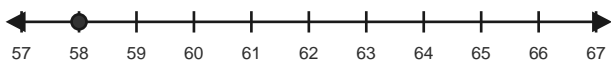
4)  $47 + 5 = \underline{\quad}$

Start at 47 and hop forward 5 times.



5)  $58 + 5 = \underline{\quad}$

Start at 58 and hop forward 5 times.



6)  $63 + 6 = \underline{\quad}$

Start at 63 and hop forward 6 times.

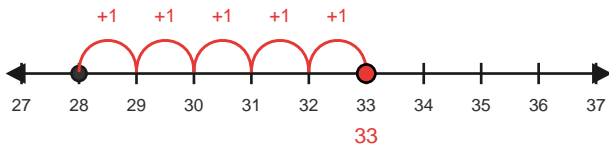


# Answer Key

The red hops show one correct way to solve each addition equation. - Within 100

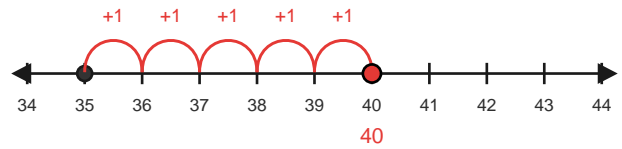
1)  $28 + 5 = 33$

Start at 28 and hop forward 5 times.



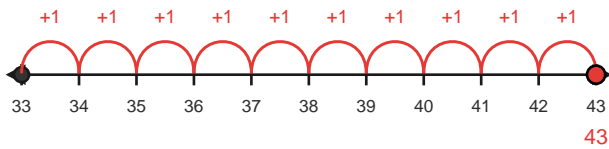
2)  $35 + 5 = 40$

Start at 35 and hop forward 5 times.



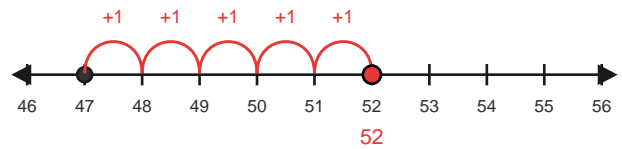
3)  $33 + 10 = 43$

Start at 33 and hop forward 10 times.



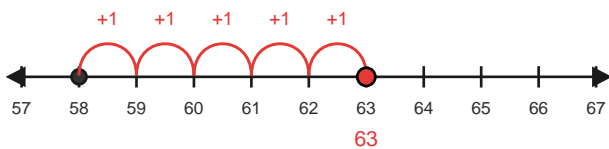
4)  $47 + 5 = 52$

Start at 47 and hop forward 5 times.



5)  $58 + 5 = 63$

Start at 58 and hop forward 5 times.



6)  $63 + 6 = 69$

Start at 63 and hop forward 6 times.

