

Visual Addition

Name: _____

Date: _____

Count both groups and add to find the total — Addition with Pictures (up to 24)



$3 + 6 = \underline{\quad}$



$3 + 8 = \underline{\quad}$




$3 + 9 = \underline{\quad}$



$3 + 10 = \underline{\quad}$



$7 + 7 = \underline{\quad}$




$7 + 8 = \underline{\quad}$



$4 + 11 = \underline{\quad}$



$6 + 10 = \underline{\quad}$




$8 + 11 = \underline{\quad}$



$10 + 10 = \underline{\quad}$



$10 + 12 = \underline{\quad}$



$12 + 12 = \underline{\quad}$