


# Visual Addition

Name: \_\_\_\_\_

Date: \_\_\_\_\_


Count both groups and add to find the total — Addition with Shapes (up to 36)




$4 + 4 = \underline{\quad}$



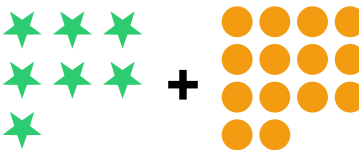
$5 + 6 = \underline{\quad}$



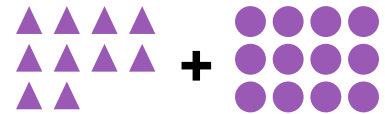
$5 + 7 = \underline{\quad}$



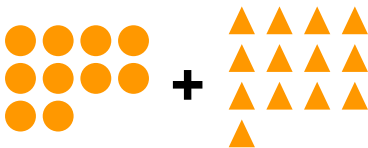
$8 + 10 = \underline{\quad}$




$7 + 14 = \underline{\quad}$



$10 + 12 = \underline{\quad}$



$10 + 13 = \underline{\quad}$



$11 + 14 = \underline{\quad}$



$14 + 14 = \underline{\quad}$