


# Visual Addition


Name: \_\_\_\_\_

Date: \_\_\_\_\_

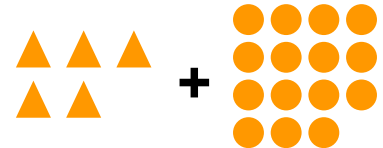
Count both groups and add to find the total — Addition with Shapes (up to 36)




$6 + 10 = \underline{\quad}$




$4 + 15 = \underline{\quad}$



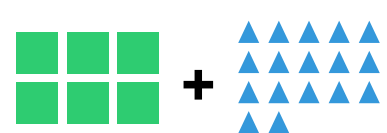
$5 + 15 = \underline{\quad}$




$6 + 15 = \underline{\quad}$



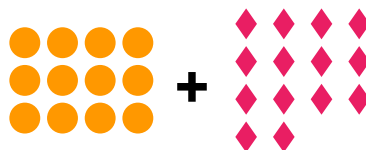
$9 + 13 = \underline{\quad}$




$6 + 17 = \underline{\quad}$



$10 + 15 = \underline{\quad}$



$12 + 14 = \underline{\quad}$



$14 + 15 = \underline{\quad}$