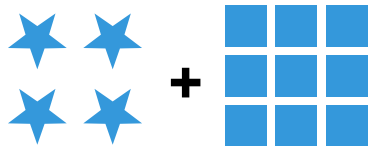


Visual Addition


Name: _____

Date: _____

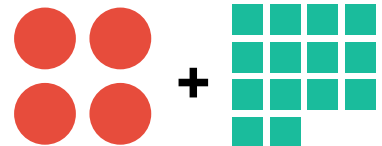
Count both groups and add to find the total — Addition with Shapes (up to 36)



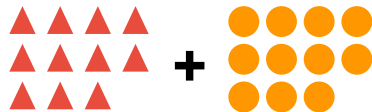
$4 + 9 = \underline{\quad}$



$6 + 11 = \underline{\quad}$




$4 + 14 = \underline{\quad}$




$11 + 11 = \underline{\quad}$




$9 + 15 = \underline{\quad}$




$8 + 16 = \underline{\quad}$



$7 + 17 = \underline{\quad}$



$6 + 18 = \underline{\quad}$



$11 + 17 = \underline{\quad}$