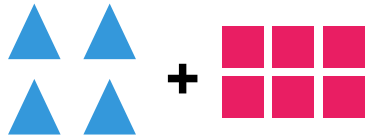


Visual Addition

Name: _____

Date: _____


Count both groups and add to find the total — Addition with Shapes (up to 36)




$4 + 6 = \underline{\quad}$




$5 + 12 = \underline{\quad}$



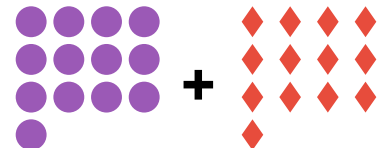
$5 + 13 = \underline{\quad}$




$4 + 18 = \underline{\quad}$




$7 + 17 = \underline{\quad}$



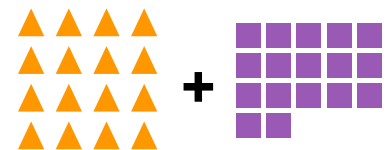
$13 + 13 = \underline{\quad}$



$12 + 14 = \underline{\quad}$



$11 + 18 = \underline{\quad}$



$16 + 17 = \underline{\quad}$