


Visual Addition

Name: _____

Date: _____


Count both groups and add to find the total — Addition with Shapes (up to 50)



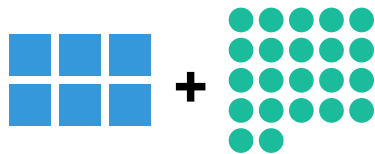
$7 + 10 = \underline{\quad}$



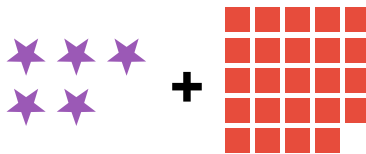
$7 + 11 = \underline{\quad}$



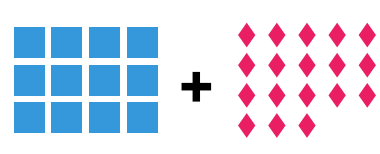
$7 + 13 = \underline{\quad}$



$6 + 22 = \underline{\quad}$



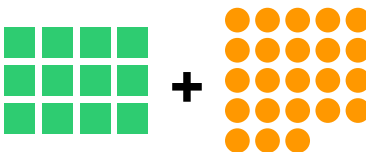
$5 + 24 = \underline{\quad}$



$12 + 18 = \underline{\quad}$



$9 + 22 = \underline{\quad}$



$12 + 23 = \underline{\quad}$



$21 + 21 = \underline{\quad}$