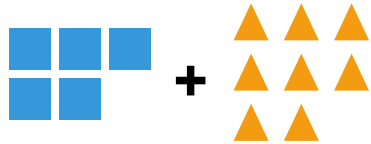


Visual Addition


Name: _____

Date: _____


Count both groups and add to find the total — Addition with Shapes (up to 50)




$5 + 8 = \underline{\quad}$



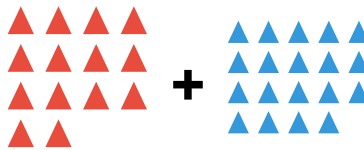
$7 + 9 = \underline{\quad}$




$13 + 13 = \underline{\quad}$



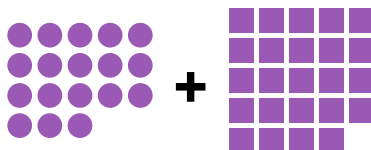
$13 + 15 = \underline{\quad}$



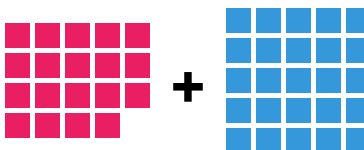
$14 + 19 = \underline{\quad}$




$17 + 17 = \underline{\quad}$



$18 + 24 = \underline{\quad}$



$19 + 25 = \underline{\quad}$



$23 + 23 = \underline{\quad}$