

# Visual Addition


Name: \_\_\_\_\_

Date: \_\_\_\_\_

Count both groups and add to find the total — Addition with Shapes (up to 50)



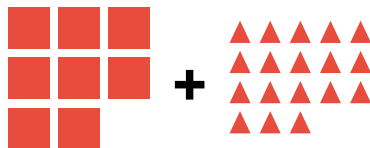
$5 + 5 = \underline{\quad}$



$9 + 11 = \underline{\quad}$




$5 + 16 = \underline{\quad}$




$8 + 18 = \underline{\quad}$



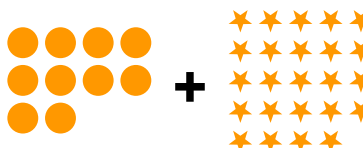
$15 + 15 = \underline{\quad}$



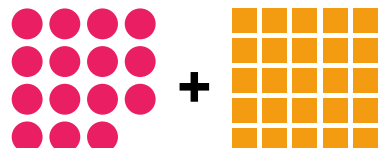
$10 + 21 = \underline{\quad}$



$6 + 25 = \underline{\quad}$



$10 + 24 = \underline{\quad}$



$15 + 25 = \underline{\quad}$