

Visual Addition

Name: _____

Date: _____


Count both groups and add to find the total — Addition with Shapes (up to 50)



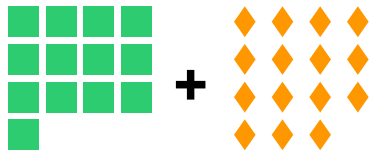
$5 + 7 = \underline{\quad}$



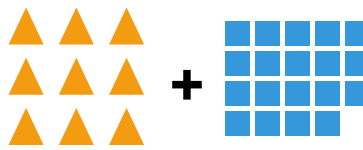
$6 + 8 = \underline{\quad}$



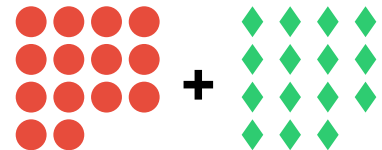
$10 + 15 = \underline{\quad}$



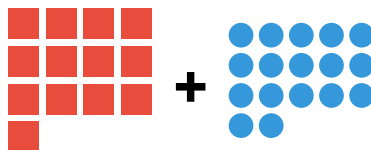
$13 + 15 = \underline{\quad}$



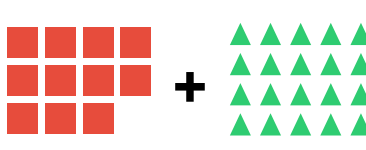
$9 + 19 = \underline{\quad}$



$14 + 15 = \underline{\quad}$



$13 + 17 = \underline{\quad}$



$11 + 20 = \underline{\quad}$



$15 + 24 = \underline{\quad}$