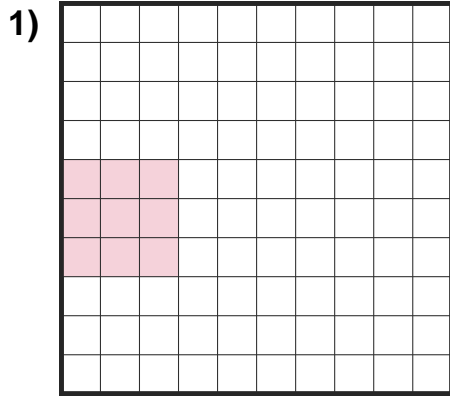


# Find the Area

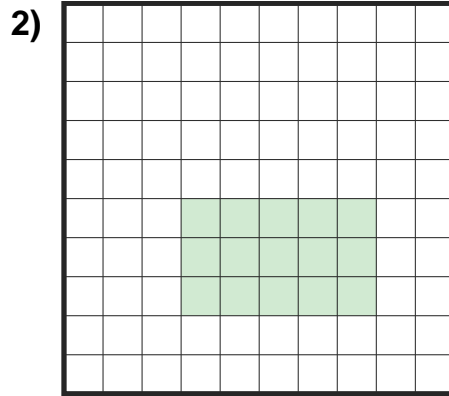
Name: \_\_\_\_\_

Date: \_\_\_\_\_

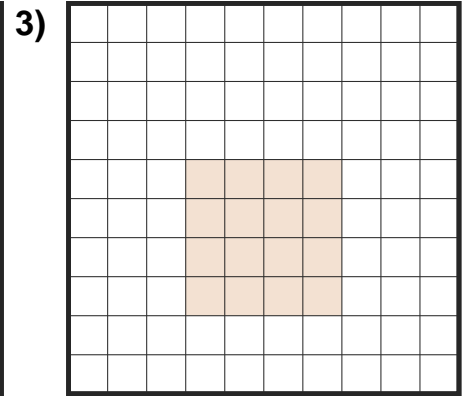
Find the area of each shaded section. Each block is 1 square unit ( $u^2$ ). — Simple Rectangles & Squares



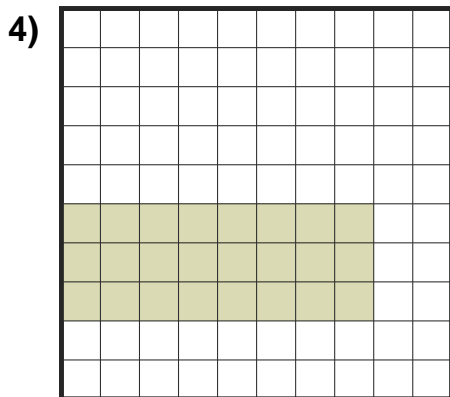
Area = \_\_\_\_\_  $u^2$



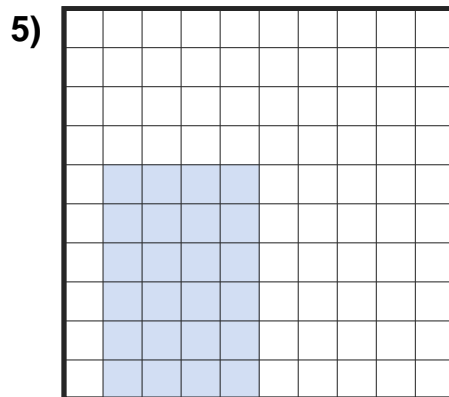
Area = \_\_\_\_\_  $u^2$



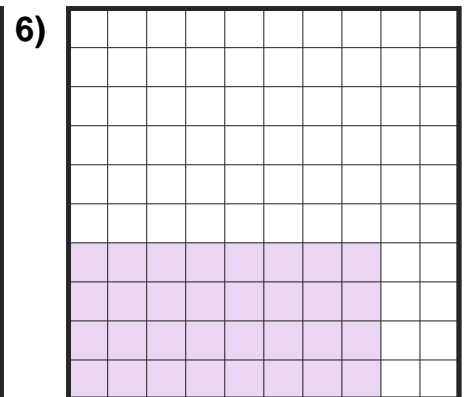
Area = \_\_\_\_\_  $u^2$



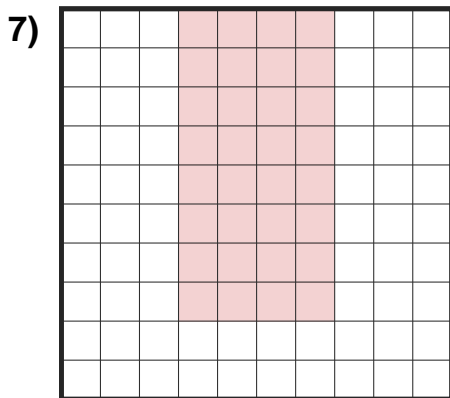
Area = \_\_\_\_\_  $u^2$



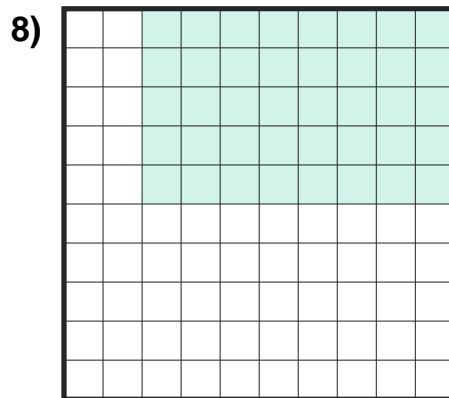
Area = \_\_\_\_\_  $u^2$



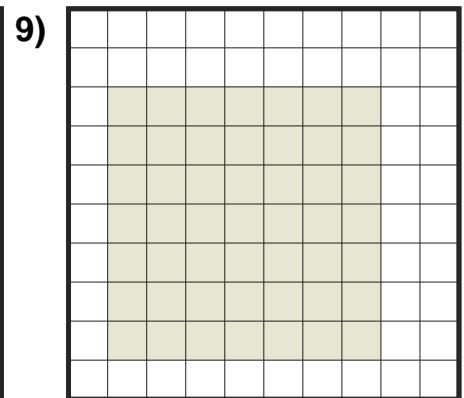
Area = \_\_\_\_\_  $u^2$



Area = \_\_\_\_\_  $u^2$



Area = \_\_\_\_\_  $u^2$



Area = \_\_\_\_\_  $u^2$





## Answer Key

1)  $9 u^2$

4)  $24 u^2$

7)  $32 u^2$

2)  $15 u^2$

5)  $24 u^2$

8)  $40 u^2$

3)  $16 u^2$

6)  $32 u^2$

9)  $49 u^2$