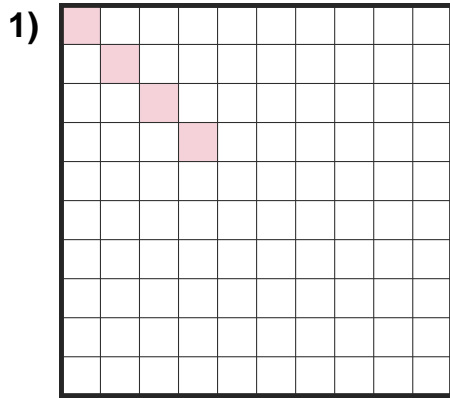


# Find the Area

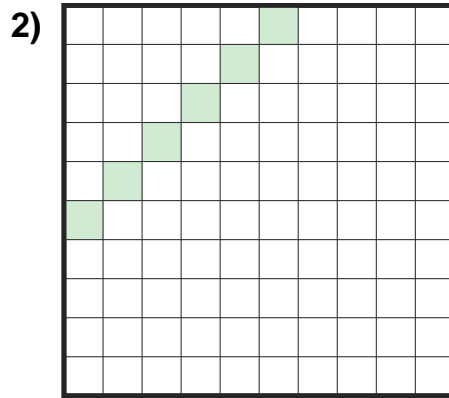
Name: \_\_\_\_\_

Date: \_\_\_\_\_

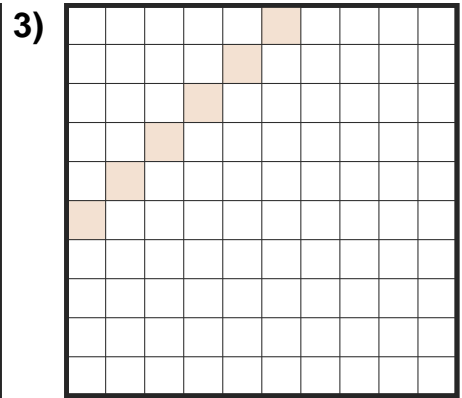
Find the area of each shaded section. Each block is 1 square unit ( $u^2$ ). — Irregular Shapes (Full Blocks)



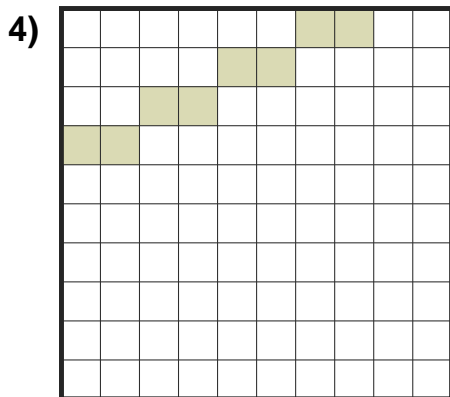
Area = \_\_\_\_\_  $u^2$



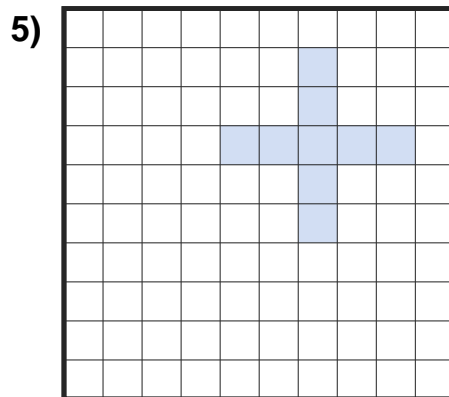
Area = \_\_\_\_\_  $u^2$



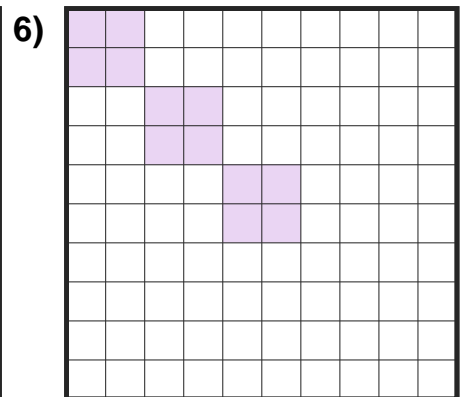
Area = \_\_\_\_\_  $u^2$



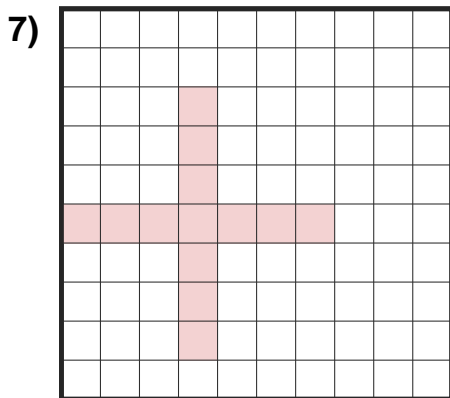
Area = \_\_\_\_\_  $u^2$



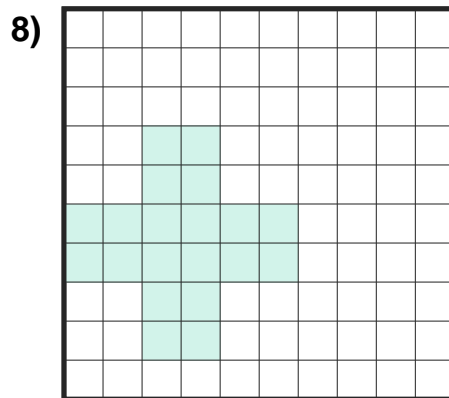
Area = \_\_\_\_\_  $u^2$



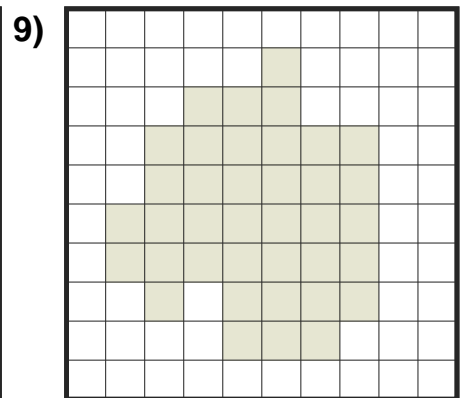
Area = \_\_\_\_\_  $u^2$



Area = \_\_\_\_\_  $u^2$



Area = \_\_\_\_\_  $u^2$



Area = \_\_\_\_\_  $u^2$



## Answer Key

1)  $4 u^2$

4)  $8 u^2$

7)  $13 u^2$

2)  $6 u^2$

5)  $9 u^2$

8)  $20 u^2$

3)  $6 u^2$

6)  $12 u^2$

9)  $38 u^2$

