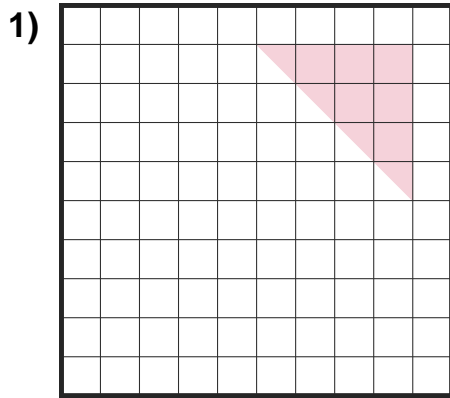


# Find the Area

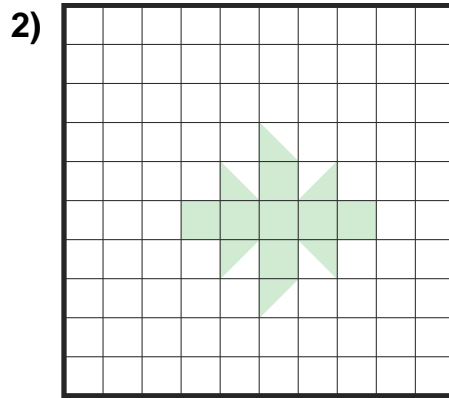
Name: \_\_\_\_\_

Date: \_\_\_\_\_

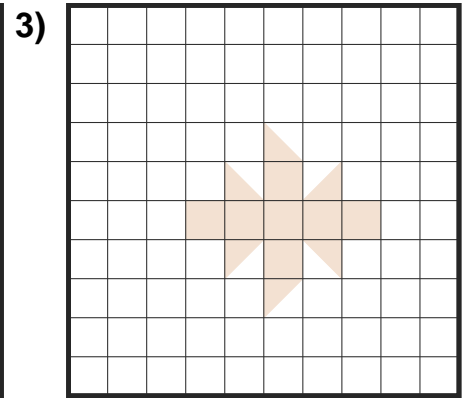
Find the area of each shaded section. Each block is 1 square unit ( $u^2$ ). — Shapes with Half Blocks



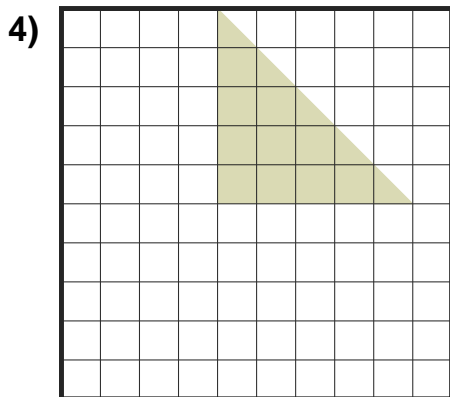
Area = \_\_\_\_\_  $u^2$



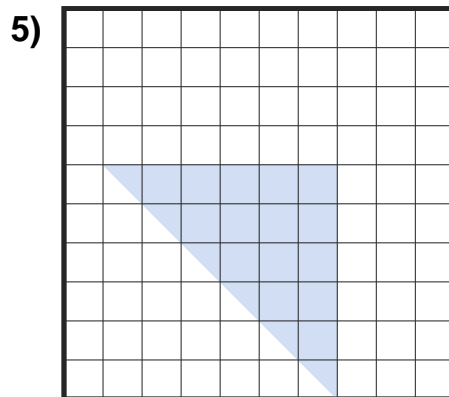
Area = \_\_\_\_\_  $u^2$



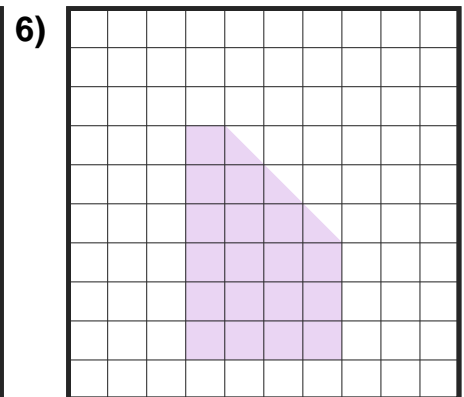
Area = \_\_\_\_\_  $u^2$



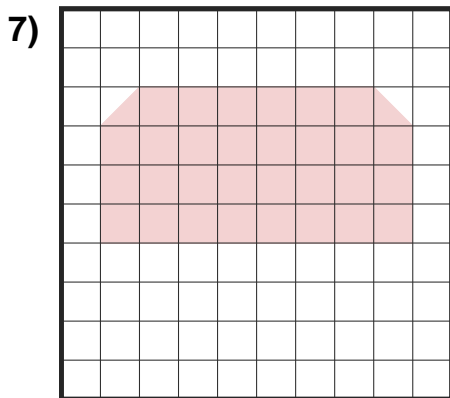
Area = \_\_\_\_\_  $u^2$



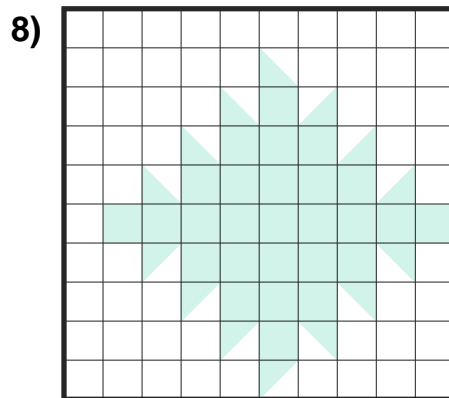
Area = \_\_\_\_\_  $u^2$



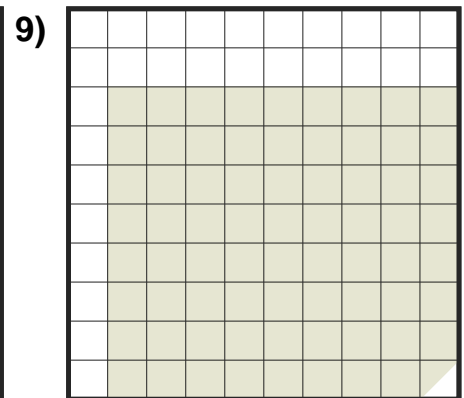
Area = \_\_\_\_\_  $u^2$



Area = \_\_\_\_\_  $u^2$



Area = \_\_\_\_\_  $u^2$



Area = \_\_\_\_\_  $u^2$



## Answer Key

1)  $8 u^2$

4)  $12.5 u^2$

7)  $31 u^2$

2)  $10 u^2$

5)  $18 u^2$

8)  $34 u^2$

3)  $10 u^2$

6)  $19.5 u^2$

9)  $71.5 u^2$