

Count the Objects

Name: _____

Date: _____

Count each group and write the total — Count to 5


1)



2)



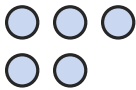
3)



4)



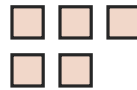
5)



6)



7)



8)



9)



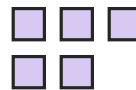
10)



11)



12)







Answer Key

1) 2

4) 3

7) 5

10) 1

2) 2

5) 5

8) 5

11) 1

3) 5

6) 2

9) 5

12) 5

