


Count the Objects

Name: _____

Date: _____

Count each group and write the total — Count to 10


1)



2)



3)



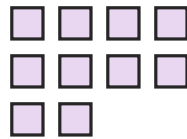
4)



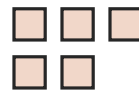
5)




6)




7)




8)



9)



10)



11)



12)





Answer Key

1) 5

4) 6

7) 5

10) 10

2) 5

5) 9

8) 8

11) 7

3) 5

6) 10

9) 5

12) 3

