

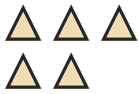
Count the Objects

Name: _____


Date: _____

Count each group and write the total — Count to 10

1)




2)



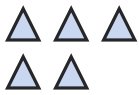
3)




4)




5)



6)



7)



8)



9)




10)



11)



12)







Answer Key

1) 5

4) 5

7) 6

10) 6

2) 7

5) 5

8) 3

11) 6

3) 3

6) 7

9) 3

12) 7

