

Count the Objects

Name: _____


Date: _____

Count each group and write the total — Count to 10


1)




2)



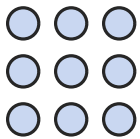
3)



4)




5)



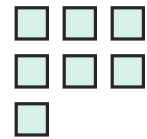
6)



7)



8)



9)



10)



11)



12)







Answer Key

1) 9

4) 6

7) 7

10) 6

2) 8

5) 9

8) 7

11) 4

3) 8

6) 5

9) 3

12) 6

