

Count the Objects

Name: _____

Date: _____

Count each group and write the total — Count to 15

1)




2)




3)




4)




5)




6)




7)




8)




9)




10)



11)



12)







Answer Key

1) 5

4) 10

7) 9

10) 8

2) 14

5) 13

8) 5

11) 15

3) 13

6) 7

9) 13

12) 13

