


# Count the Objects

Name: \_\_\_\_\_

Date: \_\_\_\_\_

Count each group and write the total — Count to 15

1)




\_\_\_\_\_

2)



\_\_\_\_\_

3)



\_\_\_\_\_

4)



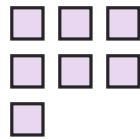
\_\_\_\_\_

5)




\_\_\_\_\_

6)



\_\_\_\_\_

7)



\_\_\_\_\_

8)



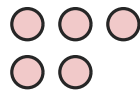
\_\_\_\_\_

9)



\_\_\_\_\_

10)




\_\_\_\_\_

11)



\_\_\_\_\_

12)



\_\_\_\_\_



## Answer Key

1) 13

4) 5

7) 7

10) 5

2) 8

5) 7

8) 5

11) 15

3) 9

6) 7

9) 9

12) 11

