


# Count the Objects

Name: \_\_\_\_\_

Date: \_\_\_\_\_


Count each group and write the total — Count to 15

1)



\_\_\_\_\_

2)




\_\_\_\_\_

3)




\_\_\_\_\_

4)




\_\_\_\_\_

5)




\_\_\_\_\_

6)




\_\_\_\_\_

7)




\_\_\_\_\_

8)




\_\_\_\_\_

9)




\_\_\_\_\_

10)



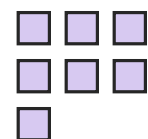
\_\_\_\_\_

11)



\_\_\_\_\_

12)



\_\_\_\_\_





## Answer Key

1) 13

4) 11

7) 6

10) 5

2) 8

5) 12

8) 11

11) 13

3) 6

6) 11

9) 15

12) 7