


Count the Objects

Name: _____


Date: _____

Count each group and write the total — Count to 20

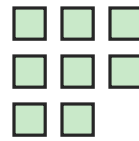
1)



2)



3)




4)




5)




6)




7)




8)



9)




10)



11)



12)







Answer Key

1) 11

4) 14

7) 13

10) 9

2) 9

5) 19

8) 15

11) 11

3) 8

6) 8

9) 10

12) 20