


# Count the Objects

Name: \_\_\_\_\_

Date: \_\_\_\_\_


Count each group and write the total — Count to 20

1)




\_\_\_\_\_

2)




\_\_\_\_\_

3)




\_\_\_\_\_

4)




\_\_\_\_\_

5)




\_\_\_\_\_

6)




\_\_\_\_\_

7)




\_\_\_\_\_

8)




\_\_\_\_\_

9)




\_\_\_\_\_

10)




\_\_\_\_\_

11)



\_\_\_\_\_

12)



\_\_\_\_\_



## Answer Key

1) 14

4) 15

7) 14

10) 15

2) 16

5) 12

8) 16

11) 13

3) 8

6) 14

9) 18

12) 14

