

Count the Objects

Name: _____


Date: _____

Count each group and write the total — Count to 20


1)




2)




3)




4)




5)




6)




7)




8)




9)



10)



11)



12)







Answer Key

1) 10

4) 15

7) 16

10) 12

2) 18

5) 11

8) 17

11) 20

3) 11

6) 13

9) 20

12) 12

