


# Count the Place Value Blocks

Name: \_\_\_\_\_

Date: \_\_\_\_\_

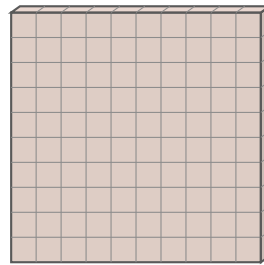
Count all the blocks and write the total — Place Value Blocks

1)



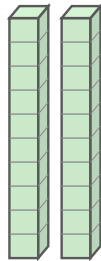

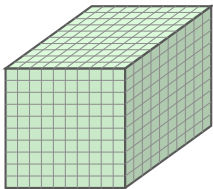
\_\_\_\_\_

2)



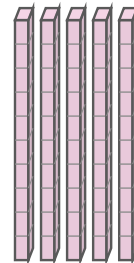

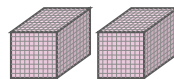
\_\_\_\_\_

3)



\_\_\_\_\_

4)



\_\_\_\_\_



## Answer Key

1) 110

2) 111

3) 1,121

4) 2,259