

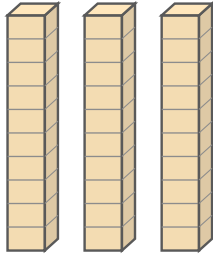
# Count the Tens Rods

Name: \_\_\_\_\_

Date: \_\_\_\_\_

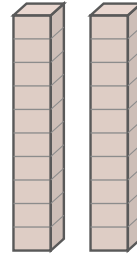
Count the tens rods and write the total — Tens Rods

1)



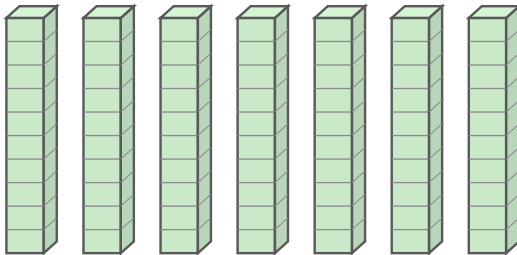
\_\_\_\_\_

2)



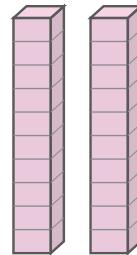
\_\_\_\_\_

3)



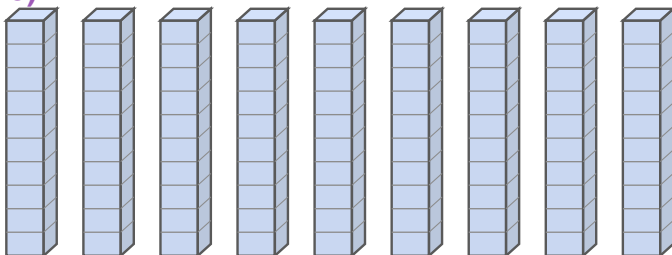
\_\_\_\_\_

4)



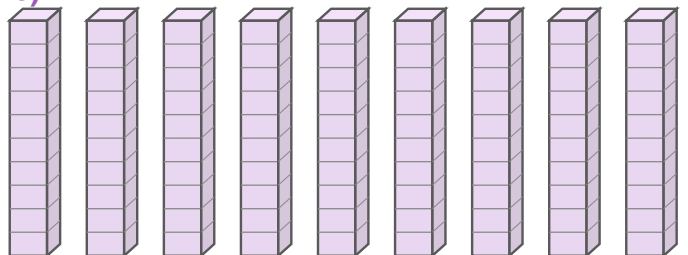
\_\_\_\_\_

5)



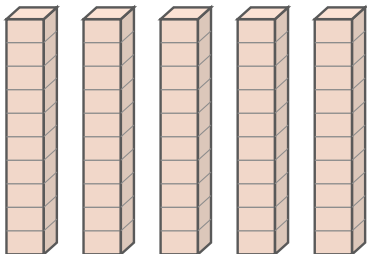
\_\_\_\_\_

6)



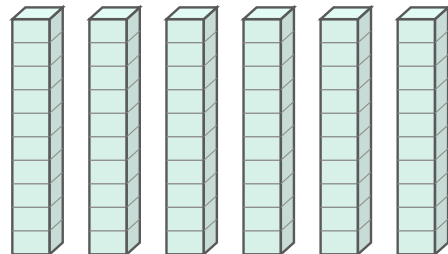
\_\_\_\_\_

7)



\_\_\_\_\_

8)



\_\_\_\_\_



## Answer Key

1) 30

2) 20

3) 70

4) 20

5) 90

6) 90

7) 50

8) 60

