

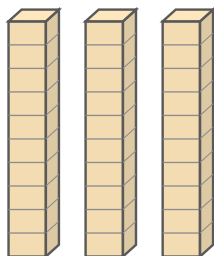
# Count the Tens Rods

Name: \_\_\_\_\_

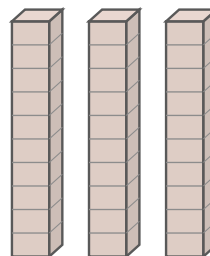
Date: \_\_\_\_\_

Count the tens rods and write the total — Tens Rods


1)



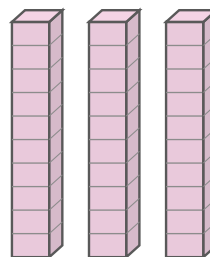
2)



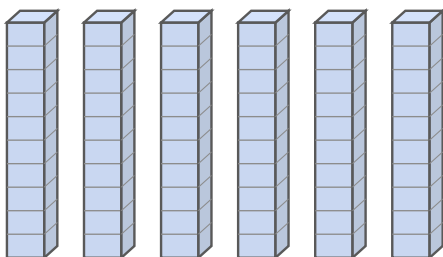
3)



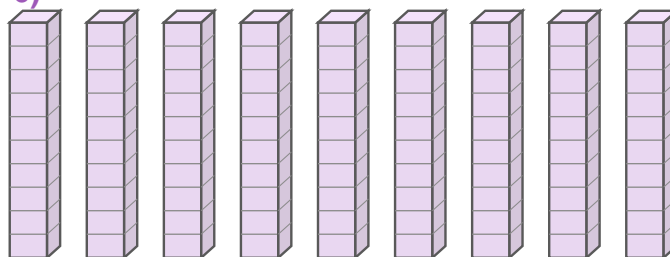
4)



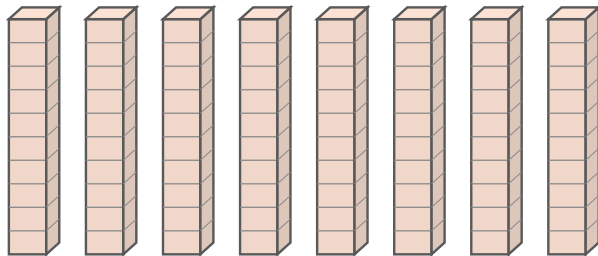
5)




6)



7)



8)





## Answer Key

1) 30

4) 30

7) 80

2) 30

5) 60

8) 30

3) 50

6) 90

