

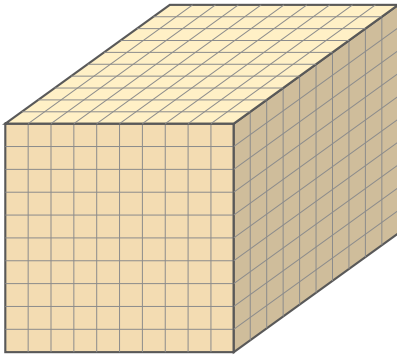
# Count the Thousand Cubes

Name: \_\_\_\_\_

Date: \_\_\_\_\_

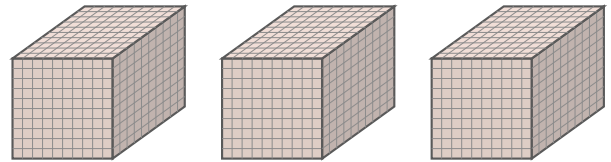
Count the thousand cubes and write the total — Thousand Cubes

1)



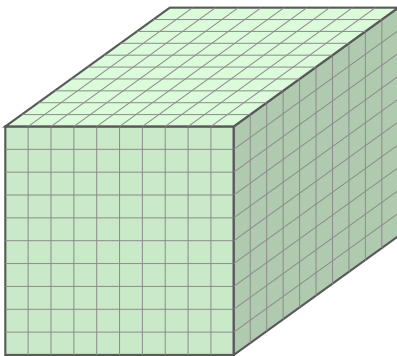
\_\_\_\_\_

2)



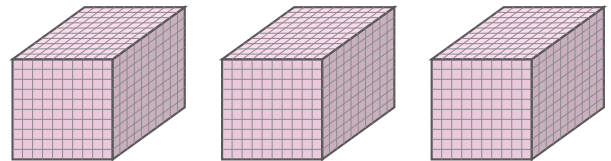
\_\_\_\_\_

3)



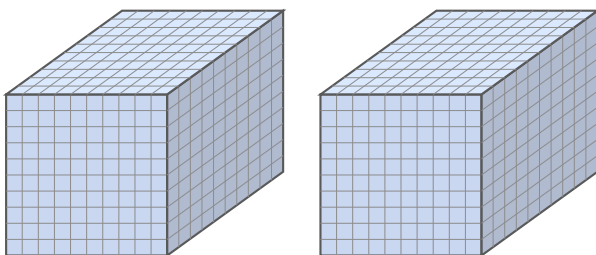
\_\_\_\_\_

4)



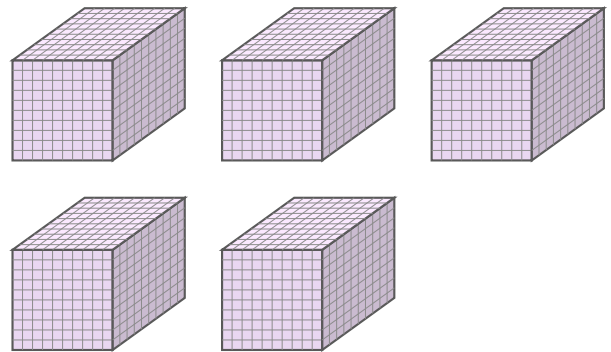
\_\_\_\_\_

5)



\_\_\_\_\_

6)



\_\_\_\_\_





## Answer Key

1) 1,000

2) 3,000

3) 1,000

4) 3,000

5) 2,000

6) 5,000