

# Division on Number Lines

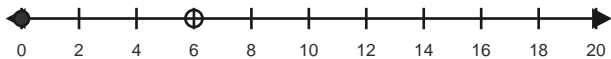
Name: \_\_\_\_\_

Date: \_\_\_\_\_

Use equal jumps on the number line to solve each equation. - Equal Jumps to 20

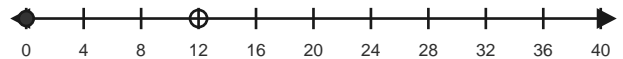
1)  $6 \div 2 = \underline{\quad}$

Make equal hops of 2 to reach 6.



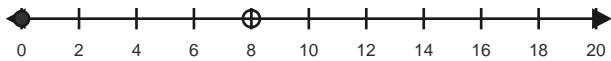
2)  $12 \div 4 = \underline{\quad}$

Make equal hops of 4 to reach 12.



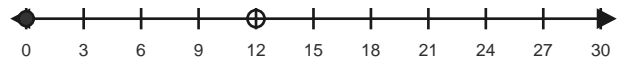
3)  $8 \div 2 = \underline{\quad}$

Make equal hops of 2 to reach 8.



4)  $12 \div 3 = \underline{\quad}$

Make equal hops of 3 to reach 12.



5)  $10 \div 2 = \underline{\quad}$

Make equal hops of 2 to reach 10.



6)  $15 \div 3 = \underline{\quad}$

Make equal hops of 3 to reach 15.



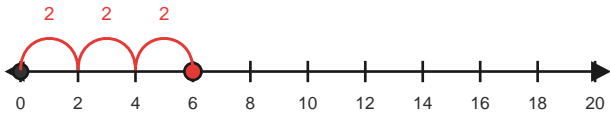
# Answer Key

The red hops show one correct way to solve each division equation. - Equal Jumps to 20

1)  $6 \div 2 = 3$

Make equal hops of 2 to reach 6.

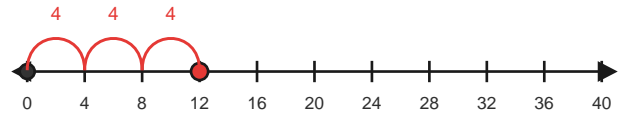
3 equal jumps



2)  $12 \div 4 = 3$

Make equal hops of 4 to reach 12.

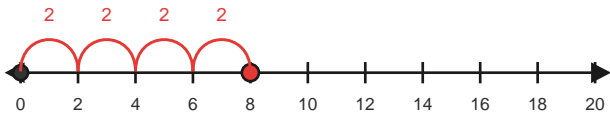
3 equal jumps



3)  $8 \div 2 = 4$

Make equal hops of 2 to reach 8.

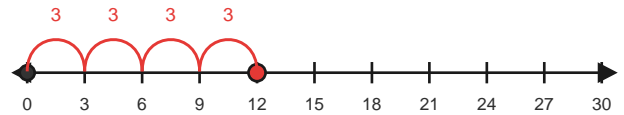
4 equal jumps



4)  $12 \div 3 = 4$

Make equal hops of 3 to reach 12.

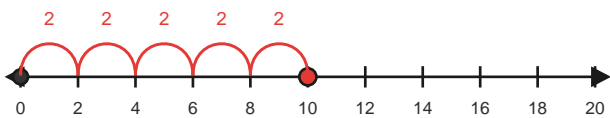
4 equal jumps



5)  $10 \div 2 = 5$

Make equal hops of 2 to reach 10.

5 equal jumps



6)  $15 \div 3 = 5$

Make equal hops of 3 to reach 15.

5 equal jumps

