

Division on Number Lines

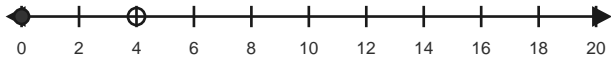
Name: _____

Date: _____

Use equal jumps on the number line to solve each equation. - Equal Jumps to 20

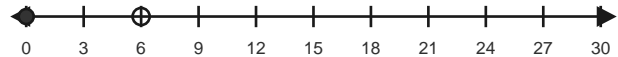
1) $4 \div 2 = \underline{\quad}$

Make equal hops of 2 to reach 4.



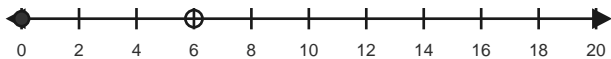
2) $6 \div 3 = \underline{\quad}$

Make equal hops of 3 to reach 6.



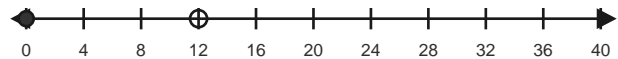
3) $6 \div 2 = \underline{\quad}$

Make equal hops of 2 to reach 6.



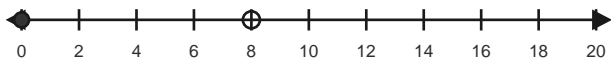
4) $12 \div 4 = \underline{\quad}$

Make equal hops of 4 to reach 12.



5) $8 \div 2 = \underline{\quad}$

Make equal hops of 2 to reach 8.



6) $15 \div 3 = \underline{\quad}$

Make equal hops of 3 to reach 15.



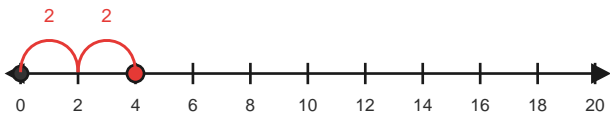
Answer Key

The red hops show one correct way to solve each division equation. - Equal Jumps to 20

1) $4 \div 2 = 2$

Make equal hops of 2 to reach 4.

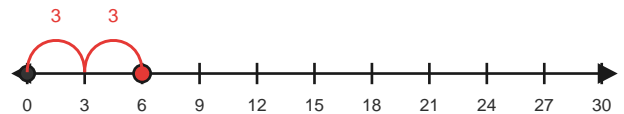
2 equal jumps



2) $6 \div 3 = 2$

Make equal hops of 3 to reach 6.

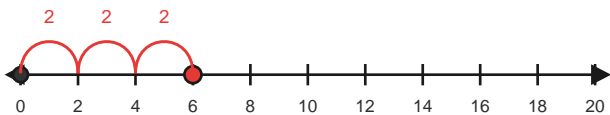
2 equal jumps



3) $6 \div 2 = 3$

Make equal hops of 2 to reach 6.

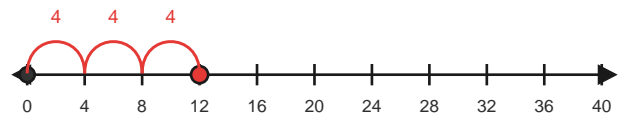
3 equal jumps



4) $12 \div 4 = 3$

Make equal hops of 4 to reach 12.

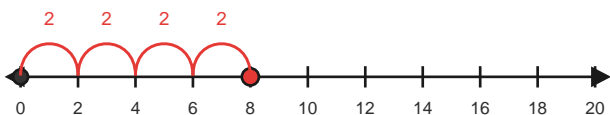
3 equal jumps



5) $8 \div 2 = 4$

Make equal hops of 2 to reach 8.

4 equal jumps



6) $15 \div 3 = 5$

Make equal hops of 3 to reach 15.

5 equal jumps

