

Division on Number Lines

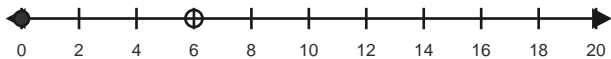
Name: _____

Date: _____

Use equal jumps on the number line to solve each equation. - Equal Jumps to 36

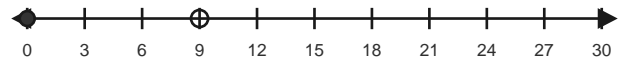
1) $6 \div 2 = \underline{\quad}$

Make equal hops of 2 to reach 6.



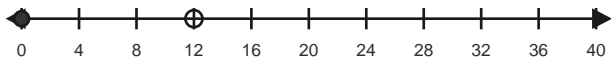
2) $9 \div 3 = \underline{\quad}$

Make equal hops of 3 to reach 9.



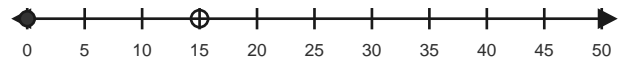
3) $12 \div 4 = \underline{\quad}$

Make equal hops of 4 to reach 12.



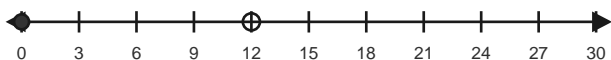
4) $15 \div 5 = \underline{\quad}$

Make equal hops of 5 to reach 15.



5) $12 \div 3 = \underline{\quad}$

Make equal hops of 3 to reach 12.



6) $15 \div 3 = \underline{\quad}$

Make equal hops of 3 to reach 15.



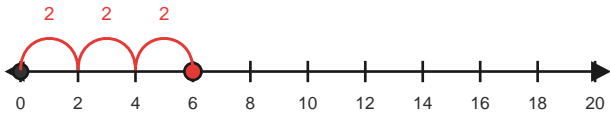
Answer Key

The red hops show one correct way to solve each division equation. - Equal Jumps to 36

1) $6 \div 2 = 3$

Make equal hops of 2 to reach 6.

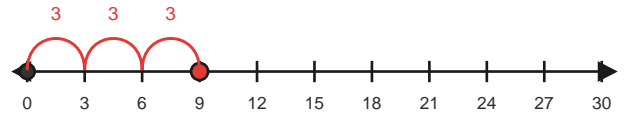
3 equal jumps



2) $9 \div 3 = 3$

Make equal hops of 3 to reach 9.

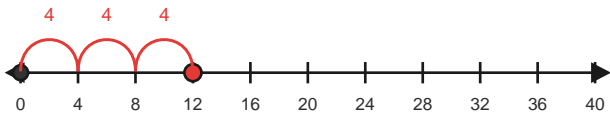
3 equal jumps



3) $12 \div 4 = 3$

Make equal hops of 4 to reach 12.

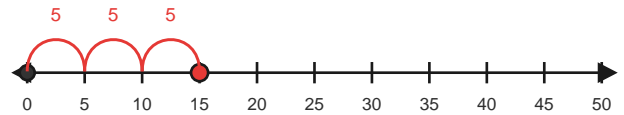
3 equal jumps



4) $15 \div 5 = 3$

Make equal hops of 5 to reach 15.

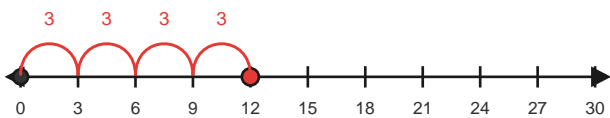
3 equal jumps



5) $12 \div 3 = 4$

Make equal hops of 3 to reach 12.

4 equal jumps



6) $15 \div 3 = 5$

Make equal hops of 3 to reach 15.

5 equal jumps

