

Visual Division

Name: _____

Date: _____

Count the groups and the objects in each box, then write the answer — Division with Pictures (up to 20)



$10 \div 2 = \underline{\quad}$



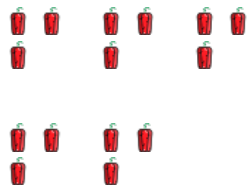
$12 \div 3 = \underline{\quad}$



$12 \div 6 = \underline{\quad}$



$14 \div 7 = \underline{\quad}$



$15 \div 3 = \underline{\quad}$




$15 \div 5 = \underline{\quad}$




$16 \div 4 = \underline{\quad}$



$16 \div 8 = \underline{\quad}$



$18 \div 3 = \underline{\quad}$



$18 \div 9 = \underline{\quad}$



$20 \div 4 = \underline{\quad}$



$20 \div 5 = \underline{\quad}$