

Visual Division

Name: _____

Date: _____


Count the groups and the objects in each box, then write the answer — Division with Pictures (up to 20)



$4 \div 2 = \underline{\quad}$



$6 \div 3 = \underline{\quad}$




$8 \div 2 = \underline{\quad}$



$9 \div 3 = \underline{\quad}$




$12 \div 2 = \underline{\quad}$



$12 \div 3 = \underline{\quad}$



$12 \div 4 = \underline{\quad}$



$14 \div 2 = \underline{\quad}$



$18 \div 2 = \underline{\quad}$



$18 \div 6 = \underline{\quad}$



$18 \div 9 = \underline{\quad}$



$20 \div 2 = \underline{\quad}$