

# Visual Division

Name: \_\_\_\_\_

Date: \_\_\_\_\_

Count the groups and the objects in each box, then write the answer — Division with Pictures (up to 24)



$6 \div 3 = \underline{\quad}$



$10 \div 2 = \underline{\quad}$




$10 \div 5 = \underline{\quad}$



$12 \div 2 = \underline{\quad}$




$12 \div 6 = \underline{\quad}$



$15 \div 3 = \underline{\quad}$



$15 \div 5 = \underline{\quad}$



$16 \div 2 = \underline{\quad}$




$18 \div 3 = \underline{\quad}$



$18 \div 6 = \underline{\quad}$



$22 \div 2 = \underline{\quad}$



$24 \div 4 = \underline{\quad}$