

Visual Division

Name: _____

Date: _____

Count the groups and the objects in each box, then write the answer — Division with Shapes (up to 30)




$12 \div 2 = \underline{\quad}$



$12 \div 4 = \underline{\quad}$



$12 \div 6 = \underline{\quad}$




$15 \div 3 = \underline{\quad}$



$15 \div 5 = \underline{\quad}$



$16 \div 4 = \underline{\quad}$




$20 \div 5 = \underline{\quad}$




$20 \div 10 = \underline{\quad}$



$22 \div 2 = \underline{\quad}$



$24 \div 3 = \underline{\quad}$



$24 \div 4 = \underline{\quad}$



$30 \div 6 = \underline{\quad}$